

1YGB - SYNOPTIC PAPER 2 - QUESTION 1

CARRY OUT THE INTEGRATION FIRST

$$\begin{aligned}\int_k^{\frac{1}{2}} \frac{6}{e^{2-3x}} dx &= \int_k^{\frac{1}{2}} 6x e^{-(2-3x)} dx = \int_k^{\frac{1}{2}} 6e^{3x-2} dx \\ &= \left[2e^{3x-2} \right]_k^{\frac{1}{2}} = 2e^{-\frac{1}{2}} - 2e^{3k-2}\end{aligned}$$

NOW SETTING UP AN EQUATION

$$\Rightarrow \int_k^{\frac{1}{2}} \frac{6}{e^{2-3x}} dx = 0.1998$$

$$\Rightarrow 2(e^{-\frac{1}{2}} - e^{3k-2}) = 0.1998$$

$$\Rightarrow \frac{1}{\sqrt{e}} - e^{3k-2} = 0.0999$$

$$\Rightarrow \frac{1}{\sqrt{e}} - 0.0999 = e^{3k-2}$$

$$\Rightarrow e^{3k-2} = 0.5066306597\dots$$

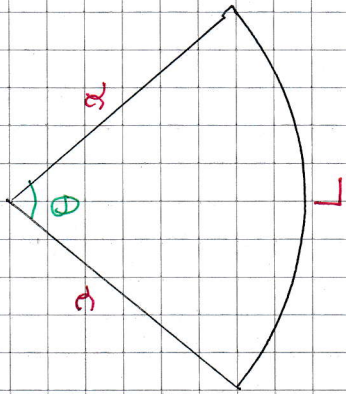
$$\Rightarrow 3k-2 = \ln(0.5066\dots)$$

$$\Rightarrow k = 0.4400089924\dots$$

$$\therefore \underline{k \approx 0.44}$$

YGB-SYNOPSIS PAPER 2 - QUESTION 2

a)



CONSTRAINT ON AREA

$$A = 36$$

$$\frac{1}{2} a^2 \theta = 36$$

$$\frac{1}{2} a^2 \theta = 36$$

$$a^2 \theta = 72$$

$$a(a\theta) = 72$$

$$a\theta = \frac{72}{a}$$

MAIN EQUATION

$$\Rightarrow P = L + 2a$$

$$\Rightarrow P = a\theta + 2a$$

$$\Rightarrow P = 2a + \frac{72}{a}$$

AS REQUIRED

b) DIFFERENTIATE & SOLVE FOR ZERO

$$P = 2a + 72a^{-1}$$

$$\frac{dP}{da} = 2 - 72a^{-2}$$

$$\Rightarrow 0 = 2 - \frac{72}{a^2}$$

$$\Rightarrow \frac{72}{a^2} = 2$$

$$\Rightarrow 2a^2 = 72$$

$$\Rightarrow a^2 = 36$$

$$\Rightarrow a = +6$$

THIS VALUE OF a MINIMIZES OR MAXIMIZES P

TO CHECK THE "EFFECT" ON P USE $\frac{d^2P}{da^2}$

$$\Rightarrow \frac{d^2P}{da^2} = 144a^{-3} = \frac{144}{a^3}$$

$$\Rightarrow \frac{d^2P}{da^2} \Big|_{a=6} = \frac{144}{6^3} = \frac{2}{3} > 0$$

INDICATES IT MINIMIZES

TO FIND THE MINIMUM VALUE OF P

$$P_{\text{MIN}} = 2 \times 6 + \frac{72}{6} = 12 + 12 = 24 \text{ cm}$$

9 USING THE CONSTRAINT EQUATION WITH $a=6$

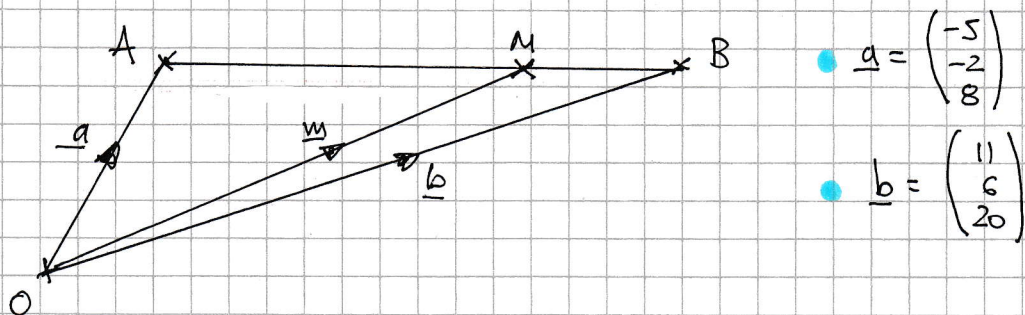
$$\Rightarrow a^2 \theta = 72$$

$$\Rightarrow 36 \theta = 72$$

$$\therefore \theta = 2^\circ$$

LYGB - SYNOPTIC PAGE 2 - QUESTION 3

STARTING WITH A DIAGRAM



• $\underline{a} = \begin{pmatrix} -5 \\ -2 \\ 8 \end{pmatrix}$

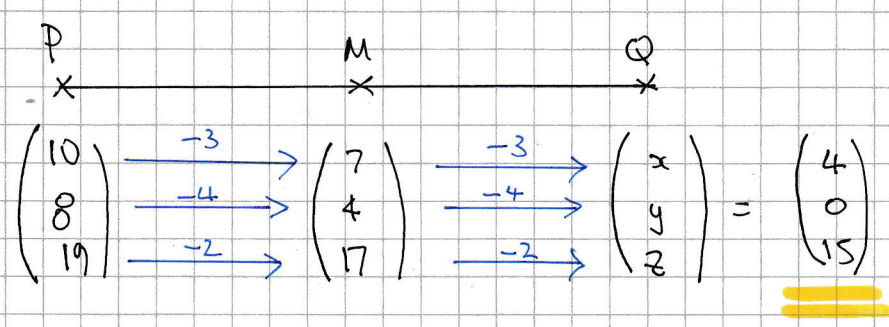
• $\underline{b} = \begin{pmatrix} 11 \\ 6 \\ 20 \end{pmatrix}$

• $-\underline{AB} = \underline{b} - \underline{a} = \begin{pmatrix} 11 \\ 6 \\ 20 \end{pmatrix} - \begin{pmatrix} -5 \\ -2 \\ 8 \end{pmatrix} = \begin{pmatrix} 16 \\ 8 \\ 12 \end{pmatrix}$

• $\underline{AM} = \frac{3}{4} \underline{AB} = \frac{3}{4} \begin{pmatrix} 16 \\ 8 \\ 12 \end{pmatrix} = \begin{pmatrix} 12 \\ 6 \\ 9 \end{pmatrix}$

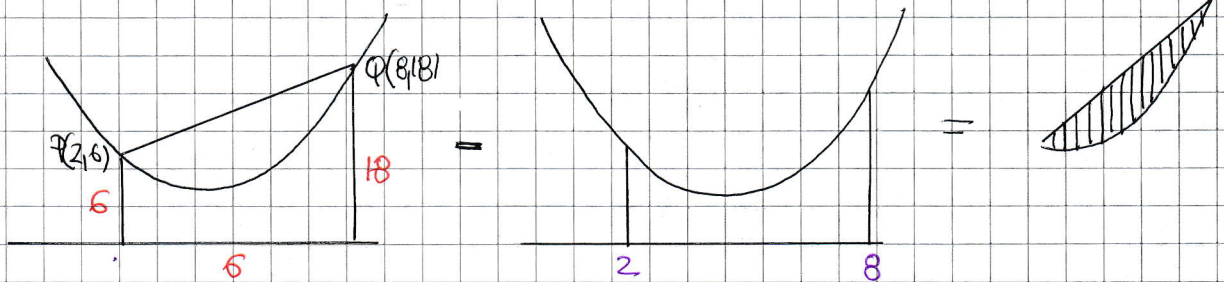
• $\underline{OM} = \underline{OA} + \underline{AM} = \begin{pmatrix} -5 \\ -2 \\ 8 \end{pmatrix} + \begin{pmatrix} 12 \\ 6 \\ 9 \end{pmatrix} = \begin{pmatrix} 7 \\ 4 \\ 17 \end{pmatrix}$

ANOTHER DIAGRAM NOW AND THE POSITION VECTOR Q CAN BE "READ OFF"



1YGB - SYNOPTIC PAPER 2 - QUESTION 4

LOOKING AT THE DIAGRAM BELOW



AREA OF TRAPEZIUM

$$\frac{1}{2}(6+18) \times 6 = 72$$

AREA UNDER CURVE

$$\int_2^8 x^2 - 8x + 18 \, dx$$

COMPLETING THE INTEGRATION

$$\begin{aligned} \int_2^8 x^2 - 8x + 18 \, dx &= \left[\frac{1}{3}x^3 - (4x^2 + 18x) \right]_2^8 \\ &= \left(\frac{512}{3} - 256 + 144 \right) - \left(\frac{8}{3} - 16 + 36 \right) \\ &= \frac{176}{3} - \frac{68}{3} \\ &= 36 \end{aligned}$$

∴ REQUIRED AREA = 72 - 36 = 36

- 1 -

YGB - SYNOPTIC PAPER 2 - QUESTION 5

USING THE POINT $(9, k)$ WITH THE LINE

$$y = 2x - 12$$

$$k = 2 \times 9 - 12$$

$$k = 6$$

THIS POINT $(9, 6)$ ALSO LIES ON THE CIRCLE

$$\Rightarrow x^2 + y^2 - 8x + cy = 33$$

$$\Rightarrow 81 + 36 - 72 + 6c = 33$$

$$\Rightarrow 45 + 6c = 33$$

$$\Rightarrow 6c = -12$$

$$\Rightarrow c = -2$$

NEXT SOLVING SIMULTANEOUSLY - ALSO FIND THE CIRCLE PARTICULARS

$$\Rightarrow x^2 + y^2 - 8x - 2y = 33$$

$$\Rightarrow (x-4)^2 - 16 + (y-1)^2 - 1 = 33$$

$$\Rightarrow (x-4)^2 + (y-1)^2 = 50$$

CENTRE AT $(4, 1)$, $r = \sqrt{50}$

$$\Rightarrow (x-4)^2 + (2x-12-1)^2 = 50$$

$$\Rightarrow (x-4)^2 + (2x-13)^2 = 50$$

$$\Rightarrow \begin{matrix} x^2 - 8x + 16 \\ 4x^2 - 52x + 169 \end{matrix} = 50$$

$$\Rightarrow 5x^2 - 60x + 135 = 0$$

$$\Rightarrow x^2 - 12x + 27 = 0$$

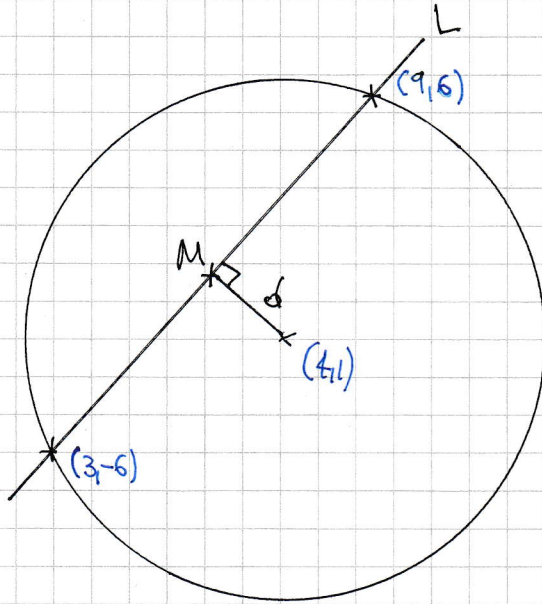
$$\Rightarrow (x-3)(x-9) = 0$$

$$x = \begin{cases} 3 \\ 9 \end{cases} \leftarrow \text{ALREADY GIVEN}$$

$$y = \begin{cases} -6 \\ 6 \end{cases}$$

1YGB - SYNOPSIS PAPER R - QUESTION 5

FINALLY WITH A DIAGRAM, NOTING THE POINTS (9,6) & (3,-6)



$$M\left(\frac{x_1+x_2}{2}, \frac{y_1+y_2}{2}\right)$$

$$M\left(\frac{3+9}{2}, \frac{-6+6}{2}\right)$$

$$M(6,0)$$

THE DISTANCE BETWEEN THE POINTS (6,0) & (4,1)

$$d = \sqrt{(6-4)^2 + (0-1)^2}$$

$$d = \sqrt{2^2 + (-1)^2}$$

$$d = \sqrt{5}$$

1YGB - SYNOPTIC PAPER B - QUESTION 6

a) EXPAND UP g INCLUDING THE x^3 TERM

$$\begin{aligned}
 (1+ax)^k &= 1 + \frac{k}{1}(ax)^1 + \frac{k(k-1)}{1 \times 2}(ax)^2 + \frac{k(k-1)(k-2)}{1 \times 2 \times 3}(ax)^3 + \dots \\
 &= 1 + \boxed{ka}x + \boxed{\frac{1}{2}k(k-1)a^2}x^2 + \boxed{\frac{1}{6}k(k-1)(k-2)a^3}x^3 + \dots
 \end{aligned}$$

\uparrow
8
 \uparrow
30
 \uparrow
?

SOLVING SIMULTANEOUS EQUATIONS

$$\left. \begin{aligned} ka &= 8 \\ \frac{1}{2}k(k-1)a^2 &= 30 \end{aligned} \right\} \Rightarrow \left. \begin{aligned} k^2a^2 &= 64 \\ k^2(k-1)a^2 &= 60k \end{aligned} \right\} \Rightarrow$$

MULTIPLY BY $2k$

$\Rightarrow 64(k-1) = 60k$

$\Rightarrow 64k - 64 = 60k$

$\Rightarrow 4k = 64$

$\Rightarrow \underline{k = 16}$

g since $ka = 8$, $a = \frac{1}{2}$

b) TO FIND THE COEFFICIENT OF x^3

$\frac{1}{6}k(k-1)(k-2)a^3 = \frac{1}{6} \times 16 \times 15 \times 14 \times \left(\frac{1}{2}\right)^3 = \underline{70}$

IXGB - SYNOPSIS PAPER 2 - QUESTION 7

a) BY THE FACTOR THEOREM / REMAINDER THEOREM

$$\begin{aligned} f(2) = 0 &\Rightarrow 2 \times 2^3 + a \times 2^2 + b \times 2 + c = 0 \\ &\Rightarrow \underline{16 + 4a + 2b + c = 0} \end{aligned}$$

$$\begin{aligned} f(-1) = 0 &\Rightarrow 2(-1)^3 + a(-1)^2 + b(-1) + c = 0 \\ &\Rightarrow \underline{-2 + a - b + c = 0} \end{aligned}$$

$$\begin{aligned} f(1) = 4 &\Rightarrow 2 \times 1^3 + a \times 1^2 + b \times 1 + c = 4 \\ &\Rightarrow \underline{2 + a + b + c = 4} \end{aligned}$$

SUBTRACT THE LAST TWO EQUATIONS

$$\begin{aligned} 4 + 2b &= -14 \\ 2b &= -18 \\ b &= -9 \end{aligned}$$

THE EQUATIONS NOW BECOME

$$\begin{aligned} 4a + c &= 2 \\ a + c &= -7 \\ a + c &= -7 \end{aligned} \quad \left. \begin{array}{l} \\ \\ \end{array} \right\} \Rightarrow \begin{aligned} 3a &= 9 \\ a &= 3 \\ c &= -10 \end{aligned}$$

$\therefore a = 3 \quad b = -9 \quad c = -10$

b) FROM PART (a) $(x-2)$ & $(x+1)$ ARE FACTORS

BY INSPECTION

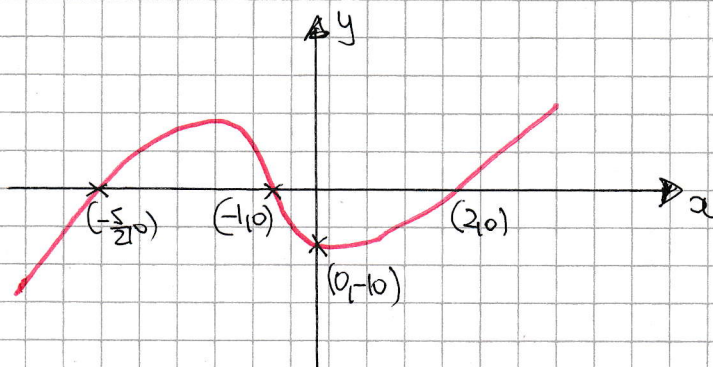
$$f(x) = 2x^3 + 3x^2 - 9x - 10$$

$$f(x) = (x-2)(x+1)(2x+5)$$

$$+x^3 \Rightarrow \text{sketch of a cubic curve}$$

$$x=0 \quad y=-10 \quad (0, -10)$$

$$y=0 \quad x = \begin{cases} \frac{1}{2} & (-1, 0) \\ 2 & (2, 0) \\ -\frac{5}{2} & (-\frac{5}{2}, 0) \end{cases}$$



IYGB - SYNOPTIC PAPER 2 - QUESTION 8

a) MANIPULATE AS FOLLOWS

$$f(x) = \frac{4x-13}{x-3} = \frac{4(x-3)-1}{x-3} = \frac{4(x-3)}{\cancel{x-3}} - \frac{1}{x-3} = 4 - \frac{1}{x-3}$$

b) WORKING WITH TRANSFORMATIONS, STARTING WITH $y = \frac{1}{x}$

$$\frac{1}{x} \xrightarrow{\text{REPLACE } x \text{ WITH } (x-3)} \frac{1}{(x-3)} \xrightarrow{\text{MULTIPLY THE ENTIRE "FUNCTION" BY } -1} -\left(\frac{1}{x-3}\right) \xrightarrow{\text{ADD 4 TO THE "ENTIRE FUNCTION"}} \left(-\frac{1}{x-3}\right) + 4$$

REPLACE x WITH $(x-3)$

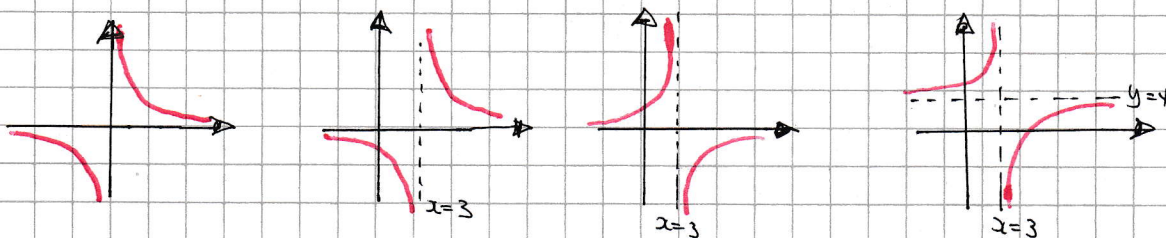
TRANSLATION BY 3 UNITS TO THE "RIGHT"

MULTIPLY THE ENTIRE "FUNCTION" BY -1

REFLECTION ABOUT THE x AXIS

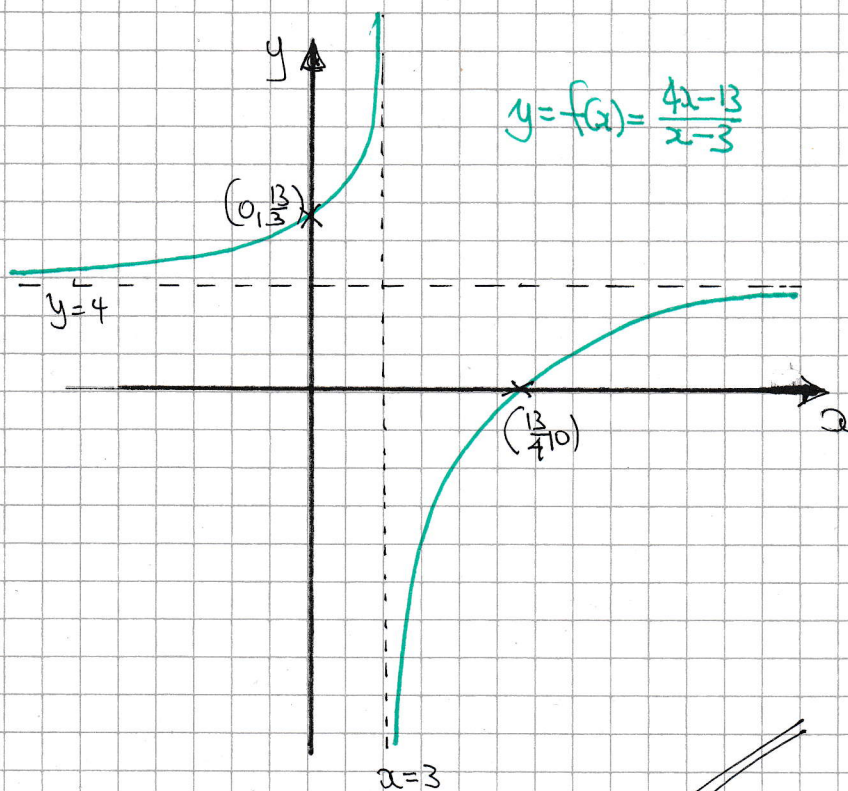
ADD 4 TO THE "ENTIRE FUNCTION"

TRANSLATION BY 4 UNITS "UPWARDS"



OBTAIN THE x & y INTERCEPTS AND SKETCH

- $x=0$
 $y = \frac{4 \times 0 - 13}{0 - 3} = \frac{13}{3}$
 $(0, \frac{13}{3})$
- $y=0$
 $0 = \frac{4x-13}{x-3}$
 $4x-13=0$
 $x = \frac{13}{4}$
 $(\frac{13}{4}, 0)$



1YGB - SYNOPTIC PAPER 2 - QUESTION 8

c) USING THE ORIGINAL EXPRESSION FOR $f(x)$ TO SOLVE THE REQUIRED EQUATION

$$\Rightarrow \frac{4x-13}{x-3} = \frac{3}{x}$$

$$\Rightarrow 4x^2 - 13x = 3x - 9$$

$$\Rightarrow 4x^2 - 16x + 9 = 0$$

$$\Rightarrow x^2 - 4x + \frac{9}{4} = 0$$

COMPLETING THE SQUARE

$$\Rightarrow (x-2)^2 - 4 + \frac{9}{4} = 0$$

$$\Rightarrow (x-2)^2 = 4 - \frac{9}{4}$$

$$\Rightarrow (x-2)^2 = \frac{7}{4}$$

$$\Rightarrow x-2 = \pm \frac{\sqrt{7}}{2}$$

$$\Rightarrow x = 2 \pm \frac{1}{2}\sqrt{7}$$

YGB - SYNOPSIS PAPER 2 - QUESTION 9

IF $f(n)$ IS TO BE A SQUARE NUMBER, THEN IT MUST BE A PERFECT SQUARE IE RATIONAL ROOTS

$$f(n) = n^2 - 2kn + k + 12$$

$$\Rightarrow b^2 - 4ac = 0$$

$$\Rightarrow (-2k)^2 - 4 \times 1 \times (k + 12) = 0$$

$$\Rightarrow 4k^2 - 4(k + 12) = 0$$

$$\Rightarrow k^2 - (k + 12) = 0$$

$$\Rightarrow k^2 - k - 12 = 0$$

$$\Rightarrow (k - 4)(k + 3) = 0$$

$$\therefore k = \begin{cases} -3 \\ 4 \end{cases}$$

IYGB - SYNOPTIC PAPER 2 - QUESTION 10

a) START BY OBTAINING THE FIRST TWO DERIVATIVES OF $f(x)$

$$f(x) = e^{3x} - 4e^{-3x}$$

$$f'(x) = 3e^{3x} + 12e^{-3x}$$

$$f''(x) = 9e^{3x} - 36e^{-3x}$$

$$= 9[e^{3x} - 4e^{-3x}]$$

$$= 9f(x)$$

$$\therefore \underline{f''(x) > 0 \Rightarrow 9f(x) > 0 \Rightarrow f(x) > 0}$$

INDICATES THE SAME SOLUTION INTERVAL

b) SOLVING $f(x) > 0$

$$\Rightarrow e^{3x} - 4e^{-3x} > 0$$

$$\Rightarrow e^{-3x}(e^{6x} - 4) > 0$$

$$\Rightarrow e^{6x} - 4 > 0 \quad [e^{-3x} > 0]$$

$$\Rightarrow e^{6x} > 4$$

$$\Rightarrow 6x > \ln 4 \quad [= 2 \ln 2]$$

$$\Rightarrow 3x > \ln 2$$

$$\Rightarrow \underline{x > \frac{1}{3} \ln 2}$$

ALTERNATIVE

$$e^{3x} - 4e^{-3x} > 0$$

$$e^{3x} > 4e^{-3x}$$

$$e^{6x} > \frac{4}{e^{3x}}$$

$$e^{6x} > 4 \quad [e^{3x} > 0]$$

...

$$\underline{x > \frac{1}{3} \ln 2}$$

1YGB - SYNOPTIC PART 2 - QUESTION 11

DIFFERENTIATE IMPLICITLY WITH RESPECT TO x

$$\Rightarrow 8x^4 + 32xy^3 + 16y^4 = 1$$

$$\Rightarrow \frac{d}{dx}(8x^4) + \frac{d}{dx}(32xy^3) + \frac{d}{dx}(16y^4) = \frac{d}{dx}(1)$$

$$\Rightarrow 32x^3 + 32y^3 + 96xy^2 \frac{dy}{dx} + 64y^3 \frac{dy}{dx} = 0$$

$$\Rightarrow x^3 + y^3 + 3xy^2 \frac{dy}{dx} + 2y^3 \frac{dy}{dx} = 0$$

NOW GRADIENT OF $\frac{1}{z}$

$$\Rightarrow x^3 + y^3 + \frac{1}{2}(3xy^2) + y^3 = 0$$

$$\Rightarrow 2x^3 + 3xy^2 = 0$$

$$\Rightarrow x(2x^2 + 3y^2) = 0$$

THE TRIVIAL SOLUTION $x=y=0$, DOES NOT SATISFY THE CURVE,

$$\Rightarrow x=0 \quad y \neq 0$$

RETURNING TO THE EQUATION WITH $x=0$

$$\Rightarrow 16y^4 - 1 = 0$$

$$\Rightarrow y^4 = \frac{1}{16}$$

$$\Rightarrow y = \pm \frac{1}{2}$$

$$\therefore \underline{(0, -\frac{1}{2})} \text{ \& } \underline{(0, \frac{1}{2})}$$

- -

NYGB - SYNOPTIC PAPER 2 - QUESTION 12

MANIPULATE AS FOLLOWS

$$\tan 2\theta - 3 \cot \theta = 0$$

$$\frac{2 \tan \theta}{1 - \tan^2 \theta} = -\frac{3}{\tan \theta}$$

NOW NOTE THAT THE EQUATION WILL FAIL IF THE DENOMINATORS ARE $\pm \infty$, IF $\tan \theta = \pm \infty$ - EXCLUDE THIS SOLUTION

$$\Rightarrow 2 \tan^3 \theta = -3 + 3 \tan^3 \theta$$

$$\Rightarrow 3 = \tan^3 \theta$$

$$\Rightarrow \tan \theta = \pm \sqrt[3]{3}$$

COLLECTING ALL THE POSSIBILITIES, $\tan \theta = \pm \infty$, $\tan \theta = \sqrt{3}$, $\tan \theta = -\sqrt{3}$

$$\left\{ \begin{array}{l} \theta = \frac{\pi}{3} \pm n\pi \\ \theta = -\frac{\pi}{3} \pm n\pi \\ \theta = \frac{\pi}{2} \pm n\pi \\ \theta = -\frac{\pi}{2} \pm n\pi \end{array} \right. \quad n = 0, 1, 2, 3, 4$$

$$\therefore \theta = \underline{\underline{\frac{\pi}{3}, \frac{4\pi}{3}, \frac{2\pi}{3}, \frac{5\pi}{3}, \frac{\pi}{2}, \frac{3\pi}{2}}}}$$

YGB - SYNOPTIC PAPER 2 - QUESTION 13

START BY OBTAINING THE EQUATION OF THE NORMAL AT P

$$\Rightarrow y = x^3 - x^2 + 5$$

$$\Rightarrow \frac{dy}{dx} = 3x^2 - 2x$$

$$\Rightarrow \left. \frac{dy}{dx} \right|_{x=1} = 3 \cdot 1^2 - 2 \cdot 1 = 1 \quad \& \quad y|_{x=1} = 1^3 - 1^2 + 5 = 5$$

\therefore NORMAL GRADIENT IS -1 $\&$ $P(1, 5)$

$$\Rightarrow y - y_0 = m(x - x_0)$$

$$\Rightarrow y - 5 = -1(x - 1)$$

$$\Rightarrow y - 5 = -x + 1$$

$$\Rightarrow y = -x + 6$$

$$\Rightarrow \underline{y + x = 6}$$

SUPPOSE THIS NORMAL MEETS THE CURVE AGAIN

$$\left. \begin{array}{l} y = 6 - x \\ y = x^3 - x^2 + 5 \end{array} \right\} \Rightarrow \begin{array}{l} x^3 - x^2 + 5 = 6 - x \\ x^3 - x^2 + x - 1 = 0 \end{array}$$

FACTORIZER BY FACTORIZATION IN PAIRS

$$\Rightarrow x^2(x-1) + (x-1) = 0$$

$$\Rightarrow (x-1)(x^2+1) = 0$$

ONLY SOLUTION $x=1$, AS $x^2+1 \neq 0$

\therefore ONLY INTERSECTION IS THE POINT OF NORMALITY $(1, 5)$ $\&$ NO MORE !!

YOB - SYNOPTIC PART R - QUESTION 14a) NOTING THE REPEATED FACTOR IN THE DENOMINATOR

$$\frac{6x^2 - 21x + 17}{(x-3)(x-1)^2} \equiv \frac{A}{x-3} + \frac{B}{(x-1)^2} + \frac{C}{x-1}$$

$$6x^2 - 21x + 17 \equiv A(x-1)^2 + B(x-3) + C(x-1)(x-3)$$

• IF $x=1$

$$6 - 21 + 17 = -2B$$

$$2 = -2B$$

$$B = -1$$

• IF $x=3$

$$54 - 63 + 17 = 4A$$

$$8 = 4A$$

$$A = 2$$

• IF $x=0$

$$17 = A - 3B + 3C$$

$$17 = 2 + 3 + 3C$$

$$12 = 3C$$

$$C = 4$$

$$\therefore f(x) = \frac{2}{x-3} - \frac{1}{(x-1)^2} + \frac{4}{x-1}$$

b) WORK AS FOLLOWS

$$\Rightarrow g(x) = \frac{x^2 - 11x + 12}{(x-3)(x-1)^2} = \frac{(6x^2 - 5x^2) + (-21x + 16x) + (17 - 5)}{(x-3)(x-1)^2}$$

$$\Rightarrow g(x) = \frac{6x^2 - 21x + 17}{(x-3)(x-1)^2} + \frac{-5x^2 + 16x - 5}{(x-3)(x-1)^2}$$

$$\Rightarrow g(x) = f(x) + \frac{-5(x^2 - 2x + 1)}{(x-3)(x-1)^2}$$

$$\Rightarrow g(x) = f(x) - \frac{5}{x-3}$$

$$\Rightarrow g(x) = \frac{2}{x-3} - \frac{1}{(x-1)^2} + \frac{4}{x-1} - \frac{5}{x-3}$$

$$\Rightarrow g(x) = \frac{4}{x-1} - \frac{1}{(x-1)^2} - \frac{3}{x-3}$$

1YGB - SYNOPTIC PAPER 2 - QUESTION 15

TAKING NATURAL LOGARITHMS BOTH SIDES

$$e^{4x} = 16^{\frac{1}{\ln 2}}$$

$$\Rightarrow 4x = \ln 16^{\frac{1}{\ln 2}}$$

$$\Rightarrow 4x = \frac{1}{\ln 2} \times \ln 16$$

$$\Rightarrow 4x = \frac{\ln 16}{\ln 2}$$

$$\Rightarrow 4x = \frac{4 \ln 2}{\ln 2}$$

$$\Rightarrow x = 1$$

ALTERNATIVE FOR FUN

$$e^{4x} = 16^{\frac{1}{\ln 2}} = (2^4)^{\frac{1}{\ln 2}} = \dots \left[\frac{1}{\ln 2} = \frac{1}{\log_e 2} = \log_2 e \right]$$

$$\dots = (2^4)^{\log_2 e}$$

$$= 2^{4 \log_2 e}$$

$$= 2^{\log_2 e^4}$$

$$= e^4$$

$$\log_a b \equiv \frac{1}{\log_b a}$$

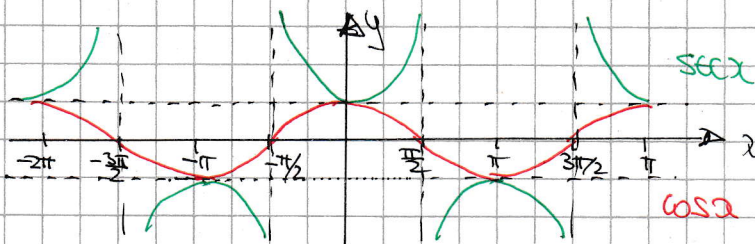
$$a^{\log_a x} \equiv x$$

$$\therefore e^{4x} = e^4$$

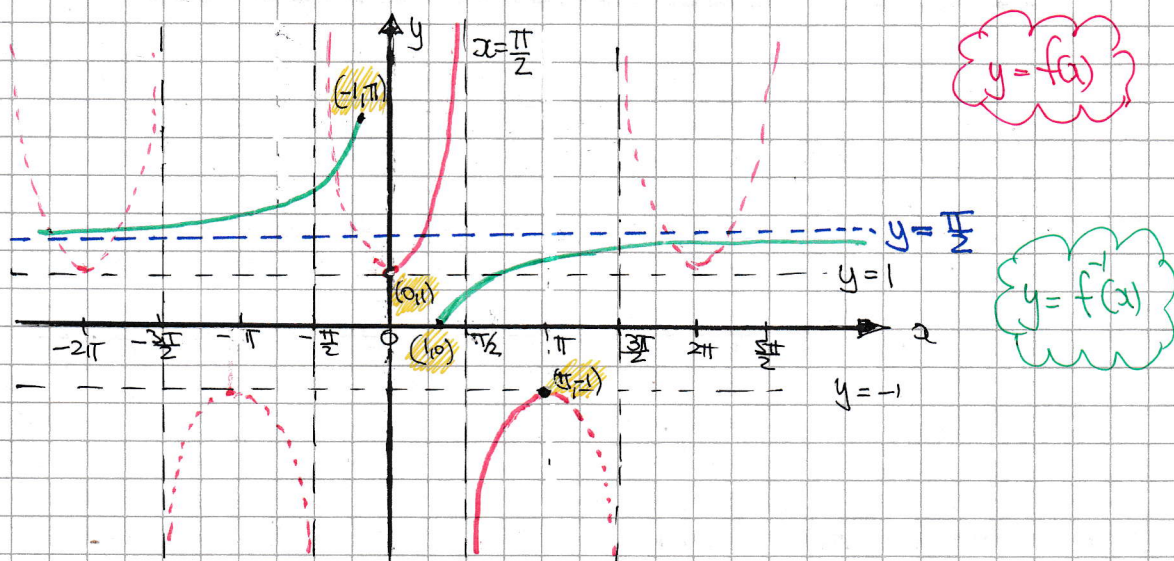
$$\Rightarrow x = 1$$

YGB - SYNOPTIC PAPER 2 - QUESTION 16

a) START BY DRAWING $\sec x$ FROM A COSINE GRAPH



HENCE DRAWING $f(x)$ AND ITS DEFINED INVERSE



b) LOOKING AT THE GRAPH ABOVE FOR $y = f^{-1}(x)$

DOMAIN: $x \leq -1 \cup x \geq 1$

RANGE: $0 \leq f^{-1}(x) \leq \pi, f^{-1}(x) \neq \frac{\pi}{2}$

c) DIRECTLY FROM THE DEFINITION GIVEN

$\Rightarrow y = \operatorname{arcsec} x$

$\Rightarrow \sec y = x$

$\Rightarrow \frac{1}{\cos y} = x$

NYGB - SYNOPTIC PAPER 2 - QUESTION 10

$$\Rightarrow \cos y = \frac{1}{x}$$

$$\Rightarrow y = \arccos\left(\frac{1}{x}\right)$$

$$\therefore \underline{\arcsin a \equiv \arccos\left(\frac{1}{a}\right)}$$

d) either use standard result & answer of part (c)

$$\frac{d}{dx}(\arcsin a) = \frac{d}{dx}\left(\arccos\left(\frac{1}{x}\right)\right) = -\frac{1}{\sqrt{1-\left(\frac{1}{x}\right)^2}} \times \frac{d}{dx}\left(\frac{1}{x}\right)$$

$$= -\frac{1}{\sqrt{1-\frac{1}{x^2}}} \times \left(-\frac{1}{x^2}\right) = +\frac{1}{\sqrt{\frac{x^2-1}{x^2}}} \times \frac{1}{x^2}$$

$$= \frac{1}{\sqrt{\frac{x^2-1}{x^2} \times x^4}} = \frac{1}{\sqrt{(x^2-1)x^2}} = \underline{\frac{1}{\sqrt{x^4-x^2}}}$$

* REQUIRED

OR BY THE INVERSE RULE

$$\Rightarrow y = \arcsin a$$

$$\Rightarrow \sin y = a$$

$$\Rightarrow a = \sin y$$

$$\Rightarrow \frac{dx}{dy} = \sin y \cos y$$

$$\Rightarrow \left(\frac{dx}{dy}\right)^2 = \sin^2 y \cos^2 y$$

$$\Rightarrow \left(\frac{dx}{dy}\right)^2 = \sin y (\sin^2 y - 1)$$

$$\Rightarrow \left(\frac{dx}{dy}\right)^2 = \sin^4 y - \sin^2 y$$

$$\Rightarrow \left(\frac{dx}{dy}\right)^2 = x^4 - x^2$$

$$\Rightarrow \left(\frac{dy}{dx}\right)^2 = \frac{1}{x^4 - x^2}$$

$$\Rightarrow \frac{dy}{dx} = \pm \frac{1}{\sqrt{x^4 - x^2}}$$

$$\Rightarrow \underline{\frac{dy}{dx} = + \frac{1}{\sqrt{x^4 - x^2}}}$$

POSITIVE GRADIENT IN THE
ENTIRE DOMAIN (GRAPH)

- 1 -

1YGB - SYNOPTIC PAPER R - QUESTION 17

USING THE SUBSTITUTION GIVEN

$$u = \frac{1}{x} + xe^x$$

$$\frac{du}{dx} = -\frac{1}{x^2} + e^x + xe^x$$

$$dx = \frac{du}{-\frac{1}{x^2} + e^x + xe^x}$$

$$dx = \frac{x^2}{x^3e^x + x^2e^x - 1} du$$

MULTIPLY TOP BOTTOM BY x^2

SUBSTITUTE INTO THE INTEGRAL

$$\begin{aligned} \int \frac{x^3 + x^2 - e^{-x}}{x^3 + xe^{-x}} dx &= \int \frac{x^3 + x^2 - e^{-x}}{x^3 + e^{-x}} \times \frac{x^2}{x^3e^x + x^2e^x - 1} du \\ &= \int \frac{x^3 + x^2 - e^{-x}}{x^3 + xe^{-x}} \times \frac{x^2e^{-x}}{x^3e^x e^{-x} + x^2e^x e^{-x} - 1e^{-x}} du \\ &= \int \frac{\cancel{x^3 + x^2} - e^{-x}}{x^3 + xe^{-x}} \times \frac{x^2e^{-x}}{\cancel{x^3 + x^2} - e^{-x}} du \\ &= \int \frac{x^2e^{-x}}{x^3 + xe^{-x}} du \\ &= \int \frac{e^{-x}}{x + \frac{1}{x}e^{-x}} du \\ &= \int \frac{1}{xe^x + \frac{1}{x}} du \\ &= \int \frac{1}{u} du \\ &= \ln|u| + C = \ln\left|\frac{1}{x} + xe^x\right| + C \end{aligned}$$

YGB - SYNOPTIC PAPER 2 - QUESTION 18

a) Using the standard formula for the sum to infinity

$$\sum_{r=0}^{\infty} ar^r = \frac{a}{1-r} \quad -1 < r < 1$$

$$\sum_{r=0}^{\infty} r^2 = \frac{\sin \theta}{1 - \cos \theta} = \dots$$

$\sin 2A \equiv 2 \sin A \cos A \Rightarrow \sin A \equiv 2 \sin \frac{A}{2} \cos \frac{A}{2}$
 $\cos 2A \equiv 1 - 2 \sin^2 A \Rightarrow \cos A \equiv 1 - 2 \sin^2 \frac{A}{2}$

$$= \frac{2 \sin \frac{\theta}{2} \cos \frac{\theta}{2}}{1 - (1 - 2 \sin^2 \frac{\theta}{2})} = \frac{\cancel{2 \sin \frac{\theta}{2}} \cos \frac{\theta}{2}}{\cancel{2 \sin^2 \frac{\theta}{2}}} = \frac{\cos \frac{\theta}{2}}{\sin \frac{\theta}{2}} = \underline{\underline{\cot \frac{\theta}{2}}}$$

As required

b) Using the same formula with $\sin \theta$ & $\cos \theta$ "reversed"

$$\sum_{r=0}^{\infty} r^2 = \frac{\cos \theta}{1 - \sin \theta} = \frac{\cos \theta (1 + \sin \theta)}{(1 - \sin \theta)(1 + \sin \theta)} = \frac{\cos \theta (1 + \sin \theta)}{1 - \sin^2 \theta}$$

$$= \frac{\cancel{\cos \theta} (1 + \sin \theta)}{\cancel{\cos^2 \theta}} = \frac{1 + \sin \theta}{\cos \theta} = \frac{1}{\cos \theta} + \frac{\sin \theta}{\cos \theta}$$

$$= \underline{\underline{\sec \theta + \tan \theta}}$$

As required

- 1 -

1YGB - SYNOPTIC TABLE 2 - QUESTION 19

GET SIMPLIFIED EXPRESSIONS FOR $f(x+h) - f(x)$

$$\begin{aligned}f(x+h) - f(x) &= \frac{(x+h)^2}{x+h-1} - \frac{x^2}{x-1} = \frac{(x-1)(x+h)^2 - x^2(x+h-1)}{(x-1)(x+h-1)} \\&= \frac{(x-1)(x^2+2xh+h^2) - x^3 - x^2h + x^2}{(x-1)(x+h-1)} \\&= \frac{\cancel{x^3} + 2x^2h + xh^2 - \cancel{x^3} - 2xh - h^2 - \cancel{x^3} - x^2h - \cancel{x^2}}{(x-1)(x+h-1)} \\&= \frac{x^2h - 2xh - h^2}{(x-1)(x+h-1)}\end{aligned}$$

NOW THE LIMITING PROCESS

$$\begin{aligned}f'(x) &= \lim_{h \rightarrow 0} \left[\frac{f(x+h) - f(x)}{h} \right] \\&= \lim_{h \rightarrow 0} \left[\frac{1}{h} (f(x+h) - f(x)) \right] \\&= \lim_{h \rightarrow 0} \left[\frac{1}{h} \left[\frac{x^2h - 2xh - h^2}{(x-1)(x+h-1)} \right] \right] \\&= \lim_{h \rightarrow 0} \left[\frac{x^2 - 2x - h}{(x-1)(x+h-1)} \right] \\&= \frac{x^2 - 2x}{(x-1)(x-1)} \\&= \frac{x(x-2)}{(x-1)^2}\end{aligned}$$

IYGB - SYNOPSIS PAPER 2 - QUESTION 20

$$\frac{dx}{dt} = k(4+x)(4-x)e^{-t} \quad t=0 \quad x=0$$

SEPARATING VARIABLES

$$\Rightarrow \frac{1}{(4+x)(4-x)} dx = k e^{-t} dt$$

$$\Rightarrow \int_{x=0}^x \frac{1}{(4+x)(4-x)} dx = \int_{t=0}^t k e^{-t} dt$$

BY PARTIAL FRACTIONS IN THE LHS

$$\frac{1}{(4+x)(4-x)} \equiv \frac{A}{4+x} + \frac{B}{4-x}$$

$$1 \equiv A(4-x) + B(4+x)$$

• If $x=4$ $1 = 8B$
 $B = \frac{1}{8}$

• If $x=-4$ $1 = 8A$
 $A = \frac{1}{8}$

RETURNING TO THE O.D.E.

$$\Rightarrow \int_{x=0}^x \frac{\frac{1}{8}}{4+x} + \frac{\frac{1}{8}}{4-x} dx = \int_{t=0}^t k e^{-t} dt$$

$$\Rightarrow \int_{x=0}^x \frac{1}{4+x} + \frac{1}{4-x} dx = \int_{t=0}^t 8k e^{-t} dt$$

$$\Rightarrow \left[\ln|4+x| - \ln|4-x| \right]_0^x = \left[-8k e^{-t} \right]_0^t$$

$$\Rightarrow \left[\ln \left| \frac{4+x}{4-x} \right| \right]_0^x = \left[8k e^{-t} \right]_0^t$$

YGB - SYNOPTIC PART 2 - QUESTION 20

$$\Rightarrow \ln \left| \frac{4+x}{4-x} \right| - \ln 1 = 8k - 8ke^{-t}$$

$$\Rightarrow \ln \left| \frac{4+x}{4-x} \right| = 8k(1 - e^{-t})$$

Now as $t \rightarrow +\infty$ $x \rightarrow 2$

$$\Rightarrow \ln \left(\frac{4+2}{4-2} \right) = 8k(1-0)$$

$$\Rightarrow \ln 3 = 8k$$

$$\Rightarrow \left(k = \frac{1}{8} \ln 3 \right)$$

FINALLY WE HAVE

$$\Rightarrow \ln \left| \frac{4+x}{4-x} \right| = (\ln 3)(1 - e^{-t})$$

$$\Rightarrow \ln \left| \frac{4+1}{4-1} \right| = (\ln 3)(1 - e^{-t})$$

$$\Rightarrow \ln \frac{5}{3} = \ln 3 (1 - e^{-t})$$

$$\Rightarrow \frac{\ln 5/3}{\ln 3} = 1 - e^{-t}$$

$$\Rightarrow e^{-t} = 1 - \frac{\ln 5/3}{\ln 3}$$

$$\Rightarrow e^{-t} = 0.535026...$$

$$\Rightarrow -t = \ln(0.535026...)$$

$$t = 0.625$$

IYGB - SYNOPTIC PAPER 2 - QUESTION 21

a) THE LINE WILL HAVE EQUATION $y = mx + c$ & PASSES THROUGH $(6, 0)$

$$\Rightarrow y = mx + c$$

$$\Rightarrow 0 = 6m + c$$

$$\Rightarrow c = -6m$$

$$\therefore y = mx + c$$

$$y = mx - 6m$$

$$y = m(x - 6)$$

AS REQUIRED

b) SOLVING SIMULTANEOUSLY l_1 & l_2

$$\begin{aligned} \bullet y &= 2x + 9 \\ \bullet y &= m(x - 6) \end{aligned} \left. \vphantom{\begin{aligned} \bullet y &= 2x + 9 \\ \bullet y &= m(x - 6) \end{aligned}} \right\} \begin{aligned} \Rightarrow m(x - 6) &= 2x + 9 \\ \Rightarrow mx - 6m &= 2x + 9 \\ \Rightarrow mx - 2x &= 6m + 9 \\ \Rightarrow x(m - 2) &= 6m + 9 \\ \Rightarrow x &= \frac{6m + 9}{m - 2} \end{aligned}$$

$$\begin{aligned} \bullet y &= 2x + 9 \\ \Rightarrow y &= 2\left(\frac{6m + 9}{m - 2}\right) + 9 \\ \Rightarrow y &= \frac{12m + 18}{m - 2} + 9 \\ \Rightarrow y &= \frac{12m + 18 + 9m - 18}{m - 2} \\ \Rightarrow y &= \frac{21m}{m - 2} \end{aligned}$$

$$\therefore A\left(\frac{6m + 9}{m - 2}, \frac{21m}{m - 2}\right)$$

c) REPEAT WITH l_1 & l_3

$$\begin{aligned} \bullet y &= 2x - 3 \\ \bullet y &= m(x - 6) \end{aligned} \left. \vphantom{\begin{aligned} \bullet y &= 2x - 3 \\ \bullet y &= m(x - 6) \end{aligned}} \right\} \begin{aligned} \Rightarrow m(x - 6) &= 2x - 3 \\ \Rightarrow mx - 6m &= 2x - 3 \\ \Rightarrow mx - 2x &= 6m - 3 \\ \Rightarrow (m - 2)x &= 6m - 3 \\ \Rightarrow x &= \frac{6m - 3}{m - 2} \end{aligned}$$

$$\begin{aligned} \bullet y &= 2x - 3 \\ \Rightarrow y &= 2\left(\frac{6m - 3}{m - 2}\right) - 3 \\ \Rightarrow y &= \frac{12m - 6}{m - 2} - 3 \\ \Rightarrow y &= \frac{12m - 6 - 3m + 6}{m - 2} \\ \Rightarrow y &= \frac{9m}{m - 2} \end{aligned}$$

YGB - SYNOPTIC PAPER 2 - QUESTION 21

THUS $A\left(\frac{6m+9}{m-2}, \frac{21m}{m-2}\right) B\left(\frac{6m-3}{m-2}, \frac{9m}{m-2}\right)$

$$\Rightarrow |AB| = \sqrt{\left[\frac{6m-3}{m-2} - \frac{6m+9}{m-2}\right]^2 + \left[\frac{21m}{m-2} - \frac{9m}{m-2}\right]^2}$$

$$\Rightarrow |AB| = \sqrt{\left(\frac{-12}{m-2}\right)^2 + \left(\frac{12m}{m-2}\right)^2}$$

$$\Rightarrow |AB| = \sqrt{\frac{144 + 144m^2}{(m-2)^2}}$$

$$\Rightarrow |AB| = \sqrt{\frac{144(1+m^2)}{m^2-4m+4}}$$

AS REQUIRED

d) FINALLY SOLVING $|AB| = 4\sqrt{2}$

$$\Rightarrow \sqrt{\frac{144(1+m^2)}{m^2-4m+4}} = 4\sqrt{2}$$

$$\Rightarrow \frac{144(1+m^2)}{m^2-4m+4} = 32$$

$$\Rightarrow 144 + 144m^2 = 32m^2 - 128m + 128$$

$$\Rightarrow 112m^2 + 128m + 16 = 0$$

$$\Rightarrow 7m^2 + 8m + 1 = 0$$

$$\Rightarrow (7m+1)(m+1) = 0$$

$$m = \begin{cases} -1 \\ -\frac{1}{7} \end{cases}$$

$$c = \begin{cases} 6 \\ \frac{6}{7} \end{cases}$$

\therefore $y = 6 - x$

$y = -\frac{1}{7}x + \frac{6}{7}$

$7y = -x + 6$

$x + 7y = 6$

+ -

IYGB - SYNOPTIC PAPER 2 - QUESTION 22

USING THE SUMMATION FORMULA FOR AN A.P. WITH $a = -10, d = 4$

$$\sum_{n=1}^k u_n = \sum_k = \frac{k}{2} [2a + (k-1)d]$$
$$\sum_{n=1}^k u_n = \sum_k = \frac{k}{2} [2(-10) + (k-1) \times 4] = \frac{k}{2} [-20 + 4k - 4] = k(2k - 12)$$
$$\sum_{n=1}^{2k} u_n = \sum_{2k} = \frac{2k}{2} [2(-10) + (2k-1) \times 4] = k[-20 + 8k - 4] = k(8k - 24)$$

THIS WE CAN WRITE

$$\sum_{n=1}^{2k} u_n - \sum_{n=1}^k u_n = 1728$$
$$k(8k - 24) - k(2k - 12) = 1728 \quad \downarrow \div 2$$
$$k(4k - 12) - k(k - 6) = 864$$
$$k(4k - 12 - k + 6) = 864$$
$$k(3k - 6) = 864 \quad \downarrow \div 3$$
$$k(k - 2) = 288$$

BY INSPECTION AS WE ARE LOOKING FOR A POSITIVE INTEGER OR THE QUADRATIC FORMULA

$$k^2 - 2k - 288 = 0$$

$$(k + 16)(k - 18) = 0$$

$$k = 18$$