

- 1 -

1YGB - FP2 PAPER 0 - QUESTION 1

$$\frac{d^2y}{dx^2} + 6\frac{dy}{dx} + 13y = 13x^2 - x + 22$$

SOLVING THE AUXILIARY EQUATION IN THE L.H.S OF THE O.D.E.

$$\begin{aligned}\Rightarrow \lambda^2 + 6\lambda + 13 &= 0 \\ \Rightarrow (\lambda + 3)^2 - 9 + 13 &= 0 \\ \Rightarrow (\lambda + 3)^2 &= -4 \\ \Rightarrow \lambda + 3 &= \pm 2i \\ \Rightarrow \lambda &= -3 \pm 2i\end{aligned}$$

COMPLEMENTARY FUNCTION

$$y = e^{-3x} (A \cos 2x + B \sin 2x)$$

PARTICULAR INTEGRAL BY TRIAL

$$\left. \begin{aligned}y &= Px^2 + Qx + R \\ \frac{dy}{dx} &= 2Px + Q \\ \frac{dy}{dx^2} &= 2P\end{aligned} \right\}$$

SUBSTITUTE INTO THE O.D.E & COMPARE

$$2P + 6(2Px + Q) + 13(Px^2 + Qx + R) \equiv 13x^2 - x + 22$$

$$13Px^2 + (12P + 13Q)x + (2P + 6Q + 13R) \equiv 13x^2 - x + 22$$

$$\begin{array}{l|l|l} \bullet P=1 & \bullet 12P+13Q=-1 & \bullet 2P+6Q+13R=22 \\ & 12+13Q=-1 & 2-6+13R=22 \\ & 13Q=-13 & 13R=26 \\ & Q=-1 & R=2 \end{array}$$

PARTICULAR INTEGRAL IS

$$y = x^2 - x + 2$$

GENERAL SOLUTION IS

$$y = e^{-3x} (A \cos 2x + B \sin 2x) + x^2 - x + 2$$

+-

1YGB - FP2 PAPER 0 - QUESTION 2

a) BY INSPECTION (COVER UP METHOD OR SIMILAR)

$$f(r) = \frac{1}{r(r+2)} = \frac{\frac{1}{2}}{r} + \frac{-\frac{1}{2}}{r+2} = \frac{\frac{1}{2}}{r} - \frac{\frac{1}{2}}{r+2}$$

$$= \frac{1}{2r} - \frac{1}{2(r+2)}$$

b) SETTING PART (a) AS AN IDENTITY

$$\frac{2}{r(r+2)} \equiv \frac{1}{r} - \frac{1}{r+2}$$

• r=1	$\frac{2}{1 \times 3} =$	$\frac{1}{1} - \frac{1}{3}$
• r=2	$\frac{2}{2 \times 4} =$	$\frac{1}{2} - \frac{1}{4}$
• r=3	$\frac{2}{3 \times 5} =$	$\frac{1}{3} - \frac{1}{5}$
• r=4	$\frac{2}{4 \times 6} =$	$\frac{1}{4} - \frac{1}{6}$
• r=5	$\frac{2}{5 \times 7} =$	$\frac{1}{5} - \frac{1}{7}$
⋮	⋮	⋮
• r=n-1	$\frac{2}{(n-1)(n+1)} =$	$\frac{1}{n-1} - \frac{1}{n+1}$
• r=n	$\frac{2}{n(n+2)} =$	$\frac{1}{n} - \frac{1}{n+2}$

$$\Rightarrow \sum_{r=1}^n \frac{2}{r(r+2)} = \frac{3}{2} - \frac{1}{n+1} - \frac{1}{n+2}$$

ADDING

$$\Rightarrow 2 \sum_{r=1}^n \frac{1}{r(r+2)} = \frac{3(n+1)(n+2) - 2(n+2) - 2(n+1)}{2(n+1)(n+2)}$$

$$\Rightarrow 2 \sum_{r=1}^n \frac{1}{r(r+2)} = \frac{3(n^2+3n+2) - 2n-4 - 2n-2}{2(n+1)(n+2)}$$

1YGB - FP2 PAPER 0 - QUESTION 2

$$\Rightarrow 2 \sum_{r=1}^n \frac{1}{r(r+2)} = \frac{3n^2 + 9n + 6 - 4n - 6}{2(n+1)(n+2)}$$

$$\Rightarrow 2 \sum_{r=1}^n \frac{1}{r(r+2)} = \frac{3n^2 + 5n}{2(n+1)(n+2)}$$

$$\Rightarrow \sum_{r=1}^n \frac{1}{r(r+2)} = \frac{n(3n+5)}{4(n+1)(n+2)}$$

~~16~~ A=3
B=5

1YGB-FP2 PAGE 0 - QUESTION 3

USING STANDARD RESULTS, RATHER THAN DIFFERENTIATION

$$\Rightarrow f(x) = (1-x)^2 \ln(1-x)$$

$$\Rightarrow f(x) = (1-2x+x^2) \left[-x - \frac{1}{2}x^2 - \frac{1}{3}x^3 + o(x^4) \right]$$

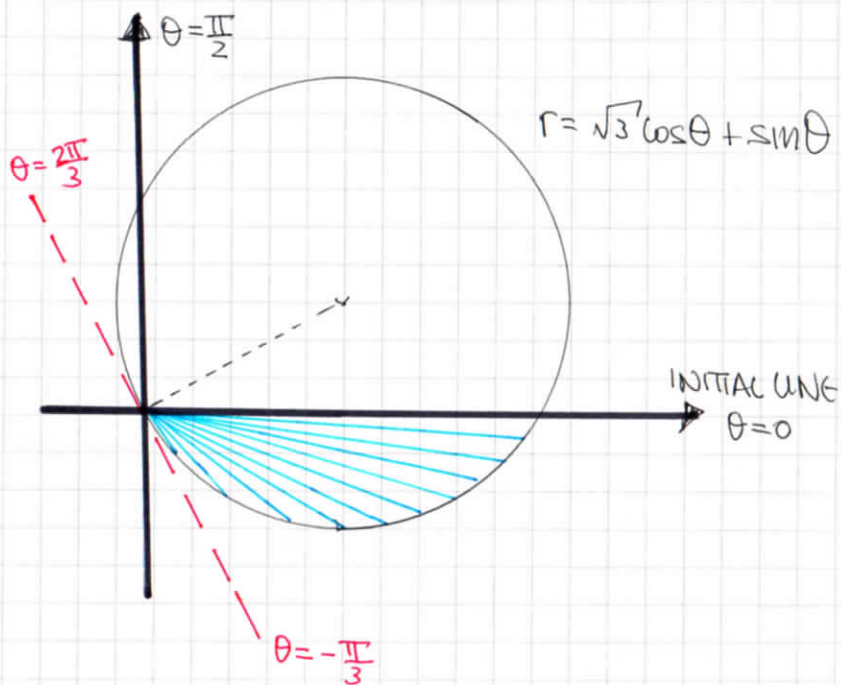
$$\begin{aligned} \ln(1+x) &\equiv x - \frac{1}{2}x^2 + \frac{1}{3}x^3 - \frac{1}{4}x^4 + o(x^5) \\ \ln(1-x) &\equiv -x - \frac{1}{2}x^2 - \frac{1}{3}x^3 - \frac{1}{4}x^4 + o(x^5) \end{aligned}$$

$$\begin{aligned} \Rightarrow f(x) &= -x - \frac{1}{2}x^2 - \frac{1}{3}x^3 + o(x^4) \\ &\quad 2x^2 + x^3 + o(x^4) \\ &\quad -x^3 + o(x^4) \end{aligned}$$

$$\Rightarrow \underline{f(x) = -x + \frac{3}{2}x^2 - \frac{1}{3}x^3 + o(x^4)}$$

1YGB - FP2 PAGE 0 - QUESTION 5

LOOKING AT THE DIAGRAM BELOW



$$AREA = \int_{\theta_1}^{\theta_2} \frac{1}{2} r^2 d\theta = \int_{\theta = -\frac{\pi}{3}}^{\theta = 0} \frac{1}{2} (\sqrt{3}\cos\theta + \sin\theta)^2 d\theta$$

$$AREA = \int_{-\frac{\pi}{3}}^0 \frac{1}{2} [3\cos^2\theta + 2\sqrt{3}\cos\theta\sin\theta + \sin^2\theta] d\theta$$

$$AREA = \frac{1}{2} \int_{-\frac{\pi}{3}}^0 \underbrace{2\cos^2\theta + 1}_{\substack{\uparrow \\ [\cos 2\theta \equiv 2\cos^2\theta - 1]}} + \sqrt{3}\sin 2\theta d\theta$$

$$AREA = \frac{1}{2} \int_{-\frac{\pi}{3}}^0 (1 + \cos 2\theta) + 1 + \sqrt{3}\sin 2\theta d\theta$$

$$AREA = \frac{1}{2} \int_{-\frac{\pi}{3}}^0 2 + \cos 2\theta + \sqrt{3}\sin 2\theta d\theta$$

$$AREA = \frac{1}{2} \left[2\theta + \frac{1}{2}\sin 2\theta - \frac{\sqrt{3}}{2}\cos 2\theta \right]_{-\frac{\pi}{3}}^0$$

$$AREA = \frac{1}{2} \left[\left(0 + 0 - \frac{\sqrt{3}}{2} \right) - \left(-\frac{2\pi}{3} - \frac{\sqrt{3}}{4} + \frac{\sqrt{3}}{4} \right) \right]$$

$$AREA = \frac{1}{2} \left[\frac{2\pi}{3} - \frac{\sqrt{3}}{2} \right]$$

$$AREA = \frac{1}{12} [4\pi - 3\sqrt{3}]$$

AS REQUIRED

- 1 -

1YGB - FP2 PAPER 0 - QUESTION 5

REWRITE THE INTEGRAL IN TERMS OF EXPONENTIALS

$$\int_0^{\ln 2} \frac{e^x}{\cosh x} dx = \int_0^{\ln 2} \frac{e^x}{\frac{1}{2}(e^x + e^{-x})} dx = \int_0^{\ln 2} \frac{2e^x}{e^x + e^{-x}} dx$$

NOW BY SUBSTITUTION WE HAVE

$$\begin{aligned} u &= e^x & \text{and} & & x=0 & \longmapsto & u=1 \\ \frac{du}{dx} &= e^x & & & x=\ln 2 & \longmapsto & u=2 \\ \frac{du}{dx} &= u & & & & & \\ dx &= \frac{du}{u} & & & & & \end{aligned}$$

TRANSFORMING THE INTEGRAL

$$\begin{aligned} \dots &= \int_1^2 \frac{2u}{u + u^{-1}} \left(\frac{du}{u} \right) = \int_1^2 \frac{2}{u + \frac{1}{u}} du \\ &= \int_1^2 \frac{2u}{u^2 + 1} du = \left[\ln(u^2 + 1) \right]_1^2 \\ &= \ln 5 - \ln 2 = \ln \frac{5}{2} \end{aligned}$$

LYGB - FP2 PAPER 0 - QUESTION 7

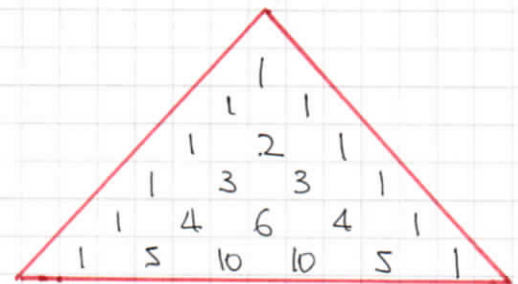
a) LET $\cos\theta + i\sin\theta \equiv C + iS$, AND RAISE BOTH SIDES OF THIS EXPRESSION TO THE POWER OF 5

$$\Rightarrow (\cos\theta + i\sin\theta)^5 = (C + iS)^5$$

$$\Rightarrow \cos 5\theta + i\sin 5\theta = (C + iS)^5$$

FOLLOWING THE PATTERN

+ + - - + + ...
 Re Im Re Im Re Im ...



$$\Rightarrow \cos 5\theta + i\sin 5\theta = C^5 + 5iC^4S - 10C^3S^2 - 10iC^2S^3 + 5C^1S^4 + iS^5$$

$$\Rightarrow \cos 5\theta + i\sin 5\theta = (C^5 - 10C^3S^2 + 5CS^4) + i(5C^4S - 10C^2S^3 + S^5)$$

$$\Rightarrow \sin 5\theta = 5(1 - S^2)^2S - 10(1 - S^2)S^3 + S^5$$

$$\Rightarrow \sin 5\theta = 5S(S^4 - 2S^2 + 1) - 10S^3 + 10S^5 + S^5$$

$$\Rightarrow \sin 5\theta = 5S^5 - 10S^3 + 5S - 10S^3 + 10S^5 + S^5$$

$$\Rightarrow \sin 5\theta = 16S^5 - 20S^3 + 5S$$

As required

b) START BY SOLVING THE EQUATION $\sin 5\theta = 0$

$$\bullet \sin 5\theta = 0$$

$$5\theta = n\pi \quad n \in \mathbb{Z}$$

$$\theta = \frac{n\pi}{5}$$

$$\theta = 0, \frac{\pi}{5}, \frac{2\pi}{5}, \frac{3\pi}{5}, \frac{4\pi}{5}, \pi, \frac{6\pi}{5}, \frac{7\pi}{5}, \frac{8\pi}{5}, \dots$$

1YGB - FP2 PAPER 0 - QUESTION 7

ALSO BY LETTING $x = \sin \theta$, THE R.H.S YIELDS

$$x(16x^4 - 20x^2 + 5) = 0$$

$$\sin \theta (16 \sin^4 \theta - 20 \sin^2 \theta + 5) = 0$$

● $\theta = 0$ IS FROM THE FACTORIZED $\sin \theta$ (OR $\theta = \pi$)

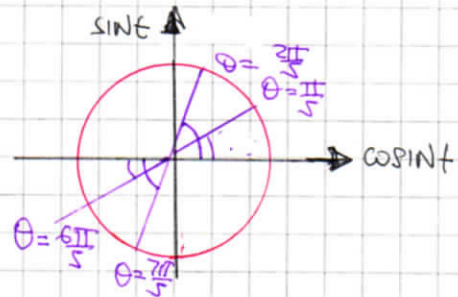
● $x = \sin \frac{\pi}{5}, x = \sin \frac{2\pi}{5}, x = \sin \frac{6\pi}{5}, x = \sin \frac{7\pi}{5}$
OR $(\sin \frac{4\pi}{5}) (\sin \frac{3\pi}{5}) (x = \sin \frac{9\pi}{5}) (x = \sin \frac{8\pi}{5})$

c) SOLVING THE QUARTIC BY THE QUADRATIC FORMULA

● $16x^4 - 20x^2 + 5 = 0 \implies x^2 = \frac{20 \pm \sqrt{80}}{32} = \frac{20 \pm 4\sqrt{5}}{32}$
 $\implies x^2 = \frac{5 \pm \sqrt{5}}{8}$

● $(x - \sin \frac{\pi}{5})(x - \sin \frac{6\pi}{5})(x - \sin \frac{2\pi}{5})(x - \sin \frac{7\pi}{5}) = 0$
 $(x - \sin \frac{\pi}{5})(x - \sin(-\frac{\pi}{5}))(x - \sin \frac{2\pi}{5})(x - \sin(-\frac{2\pi}{5})) = 0$
 $(x - \sin \frac{\pi}{5})(x + \sin \frac{\pi}{5})(x - \sin \frac{2\pi}{5})(x + \sin \frac{2\pi}{5}) = 0$
 $(x^2 - \sin^2 \frac{\pi}{5})(x^2 - \sin^2 \frac{2\pi}{5}) = 0$

● $\sin^2 \frac{\pi}{5} = \begin{cases} \frac{5 + \sqrt{5}}{8} \\ \frac{5 - \sqrt{5}}{8} \end{cases}$ OR



BUT $\sin \frac{\pi}{5} < \sin \frac{\pi}{2} < \sin \frac{\pi}{4}$
 $\sin^2 \frac{\pi}{5} < \sin^2 \frac{\pi}{2} < \sin^2 \frac{\pi}{4}$
 $\frac{1}{4} < \sin^2 \frac{\pi}{5} < \frac{1}{2}$

$\therefore \sin^2 \frac{\pi}{5} \neq \frac{5 + \sqrt{5}}{8} > \frac{1}{2}$

$\sin^2 \frac{\pi}{5} = \frac{5 - \sqrt{5}}{8}$

1YGB - FP2 PAPER 0 - QUESTION 8

a) PROCEED AS "ADVISED"

$$\Rightarrow y = \arccos x$$

$$\Rightarrow \cos y = x$$

$$\Rightarrow x = \cos y$$

$$\Rightarrow \frac{dx}{dy} = -\sin y$$

$$\Rightarrow \frac{dy}{dx} = -\frac{1}{\sin y}$$

$$\Rightarrow \frac{dy}{dx} = -\frac{1}{\sqrt{1-\cos^2 y}}$$

$$\Rightarrow \frac{dy}{dx} = -\frac{1}{\sqrt{1-x^2}}$$

As required

$\sin^2 y + \cos^2 y = 1$
 $\sin y = \pm \sqrt{1-\cos^2 y}$
 $0 \leq y \leq \pi$, so that
SIN y CANNOT BE A
NEGATIVE QUANTITY

b)

DIFFERENTIATING THE EQUATION OF THE CURVE

$$\Rightarrow y = \arccos x - \frac{1}{2} \ln(1-x^2)$$

$$\Rightarrow \frac{dy}{dx} = -\frac{1}{\sqrt{1-x^2}} - \frac{1}{2} \times \frac{1}{1-x^2} \times (-2x)$$

$$\Rightarrow \frac{dy}{dx} = \frac{x}{1-x^2} - \frac{1}{\sqrt{1-x^2}}$$

$$\Rightarrow \frac{dy}{dx} = \frac{x - \sqrt{1-x^2}}{1-x^2}$$

SETTING FOR ZERO YIELDS

$$\Rightarrow x - \sqrt{1-x^2} = 0$$

$$\Rightarrow x = \sqrt{1-x^2}$$

$$\Rightarrow x^2 = 1-x^2$$

1YGB - FP2 PAPER 0 - QUESTION 8

$$\Rightarrow 2x^2 = 1$$

$$\Rightarrow x^2 = \frac{1}{2}$$

$$\Rightarrow x = \pm \frac{1}{\sqrt{2}}$$

$$\Rightarrow x = +\frac{1}{\sqrt{2}} \quad \text{As } x = -\frac{1}{\sqrt{2}} \text{ DOES NOT SATISFY THE EQUATION } x = \sqrt{1-x^2} \text{ - THIS EXTRA SOLUTION IS DUE TO SQUARING}$$

FINDING THE y COORDINATE

$$\Rightarrow y = \arccos x - \frac{1}{2} \ln(1-x^2)$$

$$\Rightarrow y = \arccos\left(\frac{1}{\sqrt{2}}\right) - \frac{1}{2} \ln\left(1 - \frac{1}{2}\right)$$

$$\Rightarrow y = \frac{\pi}{4} - \frac{1}{2} \ln \frac{1}{2}$$

$$\Rightarrow y = \frac{\pi}{4} + \frac{1}{2} \ln 2$$

$$\Rightarrow y = \frac{1}{4} [\pi + 2 \ln 2]$$

$$\Rightarrow y = \frac{1}{4} (\pi + \ln 4)$$

AS REQUIRED

- 1 -

LYGB - FP2 PAPER 0 - QUESTION 9

$$(1-x^2) \frac{dy}{dx} + y = (1-x^2)(1-x)^{\frac{1}{2}}$$

REWRITE THE O.D.E IN "STANDARD" FORM AND LOOK FOR AN INTEGRATING FACTOR

$$\Rightarrow \frac{dy}{dx} + \frac{1}{1-x^2} \frac{dy}{dx} = (1-x)^{\frac{1}{2}}$$

$$\begin{aligned} \text{I.F.} &= e^{\int \frac{1}{1-x^2} dx} = e^{\int \frac{1}{(1+x)(1-x)} dx} = \dots \\ &= e^{\int \frac{\frac{1}{2}}{1+x} + \frac{\frac{1}{2}}{1-x} dx} = e^{\frac{1}{2} \ln \left| \frac{1+x}{1-x} \right|} = e^{\ln \sqrt{\frac{1+x}{1-x}}} = \frac{\sqrt{1+x}}{\sqrt{1-x}} \end{aligned}$$

PARTIAL FRACTIONS BY INSPECTION (WORK UP)

$$\Rightarrow \frac{d}{dx} \left[y \left(\frac{\sqrt{1+x}}{\sqrt{1-x}} \right) \right] = \cancel{(1-x)^{\frac{1}{2}}} \left(\frac{\sqrt{1+x}}{\cancel{\sqrt{1-x}}} \right)$$

$$\Rightarrow \frac{y(1+x)^{\frac{1}{2}}}{(1-x)^{\frac{1}{2}}} = \int (1+x)^{\frac{1}{2}} dx$$

$$\Rightarrow \frac{y(1+x)^{\frac{1}{2}}}{(1-x)^{\frac{1}{2}}} = \frac{2}{3}(1+x)^{\frac{3}{2}} + A$$

$$\Rightarrow y = \frac{2}{3}(1+x)^1 (1-x)^{\frac{1}{2}} + A \frac{(1-x)^{\frac{1}{2}}}{(1+x)^{\frac{1}{2}}}$$

APPLY $x = \frac{1}{2}$, $y = \frac{\sqrt{2}}{2}$

$$\Rightarrow \frac{\sqrt{2}}{2} = \frac{2}{3} \times \frac{3}{2} \times \frac{\sqrt{2}}{2} + A \frac{\sqrt{2}}{3/2}$$

$$\Rightarrow \frac{\sqrt{2}}{2} = \frac{\sqrt{2}}{2} + A \frac{\sqrt{2}}{3}$$

$$\Rightarrow A = 0$$

IYGB - FP2 PAPER 0 - QUESTION 9

$$\Rightarrow y = \frac{2}{3}(1+x)(1-x)^{\frac{1}{2}}$$

$$\Rightarrow y = \frac{2}{3}(1+x)^{\frac{1}{2}}(1+x)^{\frac{1}{2}}(1-x)^{\frac{1}{2}}$$

$$\Rightarrow y = \frac{2}{3}(1+x)^{\frac{1}{2}}\sqrt{(1+x)(1-x)}$$

$$\Rightarrow y = \frac{2}{3}(1+x)^{\frac{1}{2}}\sqrt{1-x^2}$$

$$\Rightarrow \underline{y = \frac{2}{3}\sqrt{(1+x)(1-x^2)}} \quad \text{NOT REQUIRED}$$