

- 1 -

1YGB - MMS PAPER 0 - QUESTION 1

USING A CALCULATOR IN STATS MODE TO OBTAIN THE P.M.C.C

(x) GEOGRAPHY %	80	29	56	56	58	45	67	72
(y) HISTORY %	78	49	65	50	75	50	60	47

$$r = 0.4896746... \approx 0.4897$$

NEXT SETTING HYPOTHESES

- $H_0: \rho = 0$
- $H_1: \rho > 0$, where ρ is the P.M.C.C of the entire population, NOT THAT OF THE SAMPLE OF 8

THE CRITICAL VALUE FOR $n=8$, AT 10% SIGNIFICANCE IS 0.5067

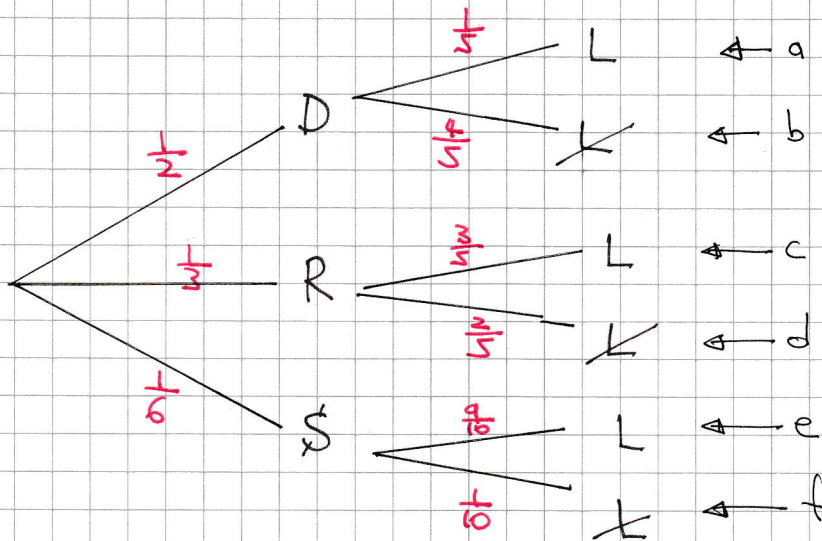
AS $0.4897 < 0.5067$ THERE IS NO SIGNIFICANT EVIDENCE OF POSITIVE CORRELATION BETWEEN THE PERCENTAGE MARKS IN GEOGRAPHY & HISTORY.

THERE IS NO SUFFICIENT EVIDENCE TO REJECT H_0

- 1 -

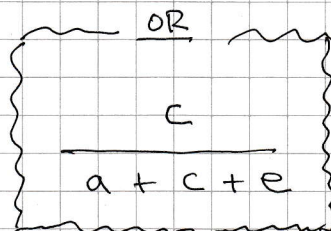
1YGB - NMS PAPER 0 - QUESTION 2

DRAWING A TREE DIAGRAM



a)
$$P(L) = a + c + e$$
$$= \left(\frac{1}{2} \times \frac{1}{5}\right) + \left(\frac{1}{3} \times \frac{2}{5}\right) + \left(\frac{1}{6} \times \frac{9}{10}\right)$$
$$= \frac{1}{10} + \frac{1}{5} + \frac{3}{20}$$
$$= \frac{9}{20} = 0.45$$

b)
$$P(R|L) = \frac{P(R \cap L)}{P(L)} = \frac{\frac{1}{3} \times \frac{2}{5}}{\frac{9}{20}} = \frac{\frac{1}{5}}{\frac{9}{20}} = \frac{4}{9}$$



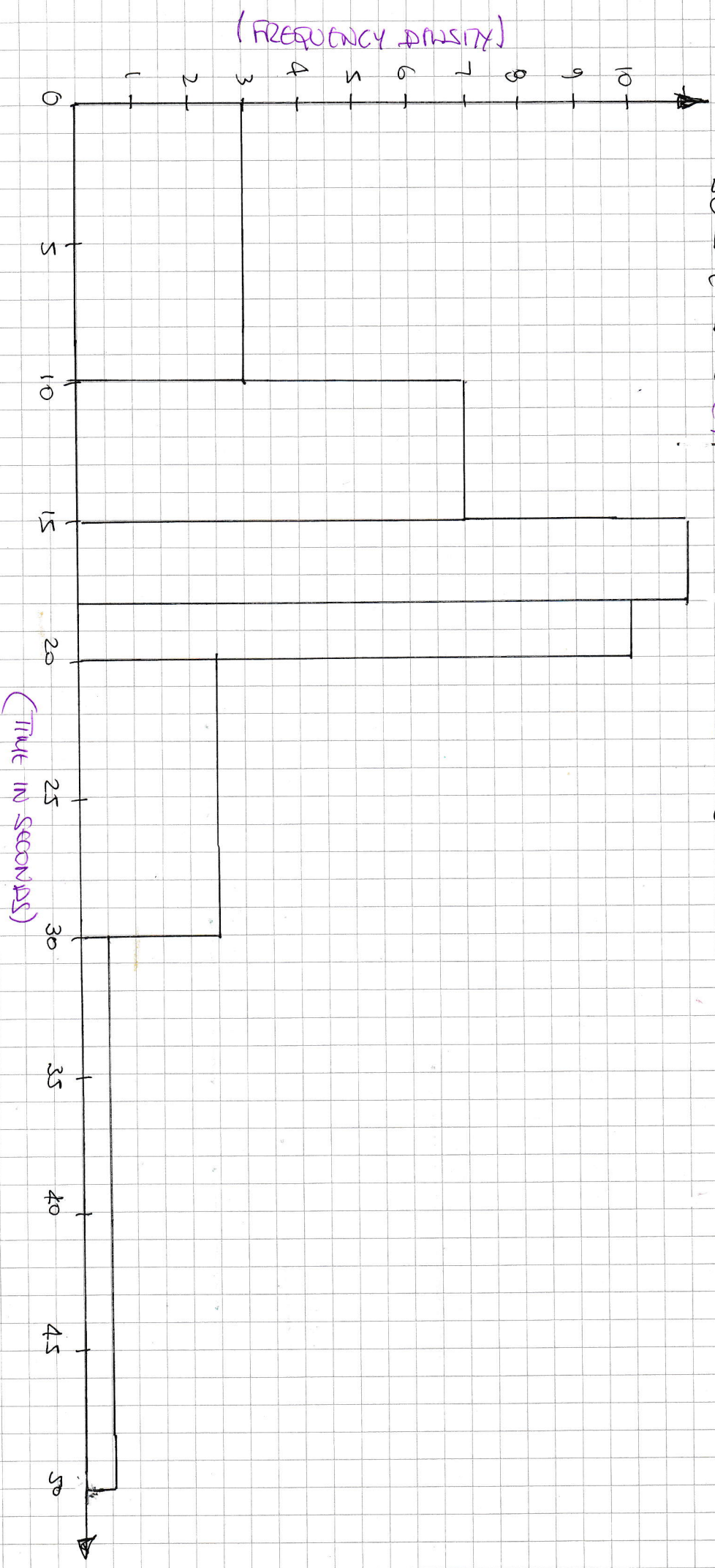
1 YG13 - MMS - PAPER 0 - QUESTION 3

a)

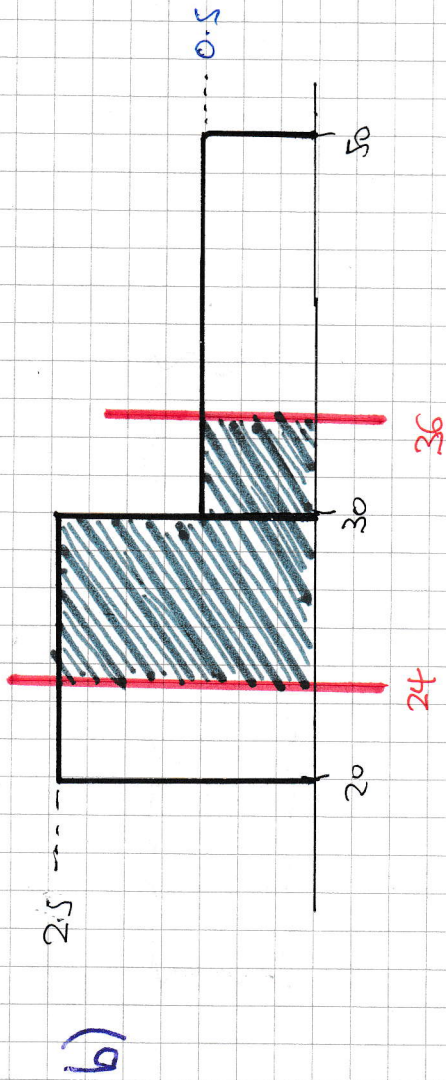
TIME (IN SECONDS) * FREQUENCY * FREQUENCY DENSITY

0	V	+	10	(5)	30	30	÷	10	=	3
10	V	+	15	(3)	35	35	÷	5	=	7
15	V	+	18	(2)	33	33	÷	3	=	11
18	V	+	20	(2)	20	20	÷	2	=	10
20	V	+	30	(10)	25	25	÷	10	=	2.5
30	V	+	50	(20)	10	10	÷	20	=	0.5

$$\text{FREQUENCY DENSITY} = \frac{\text{FREQUENCY}}{\text{CLASS WIDTH}}$$



YGB - MMS PAPER 0 - QUESTION 3



APPROXIMATELY $\approx (6 \times 24) + (6 \times 0.5) \approx 18$ PATINIS

c)

USING THE MIDPOINTS :

m	5	12.5	16.5	19	25	40
f	30	35	33	20	25	10

FROM CALCULATOR

$\sum x = 2537$ $\sum x^2 = 54049$ $n = 153$

$\bullet \bar{x} = \frac{\sum x}{n} = \frac{2537}{153} \approx 16.6$

$\bullet \sigma = \sqrt{\frac{\sum x^2}{n} - \bar{x}^2} = \sqrt{\frac{54049}{153} - 16.581^2} \approx 8.85$

1YGB - MNS PAPER 0 - QUESTION 4

LOOKING AT THE CODED-SUMMARY STATISTICS

$$\sum_{h=1}^{40} (x_h - 50) = 140 \quad \sum_{h=1}^{40} (x_h - 50)^2 = 4490$$

LET $y = x - 50$

$$\sum y = 140 \quad \sum y^2 = 4490 \quad n = 40$$

CALCULATE THE MEAN & STANDARD DEVIATION IN y

$$\bar{y} = \frac{\sum y}{n} = \frac{140}{40} = 3.5$$

$$\sigma_y = \sqrt{\frac{\sum y^2}{n} - \bar{y}^2} = \sqrt{\frac{4490}{40} - 3.5^2} = 10$$

UNCODE BACK INTO x

● $\bar{x} = \bar{y} + 50$

$$\bar{x} = 3.5 + 50$$

$$\bar{x} = 53.5$$

● $\sigma_x = \sigma_y$

$$\sigma_x = 10$$

(STANDARD DEVIATION DOES NOT GET AFFECTED BY ADDITION/SUBTRACTION)

IYGB - MMS PAGE 0 - QUESTION 5

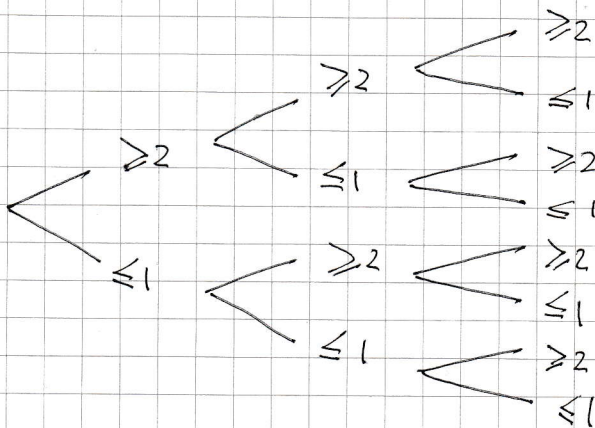
a) $X = \text{NUMBER OF PINS WITH FLAWS}$
 $X \sim B(20, 0.1)$

I) $P(X=3) = \binom{20}{3} (0.1)^3 (0.9)^{17} \approx \underline{\underline{0.1901}}$

II) $P(X \geq 2) = 1 - P(X \leq 1)$... table
 $= 1 - 0.3917$
 $= \underline{\underline{0.6083}}$

b) LISTING ALL THE OUTCOMES OR BY SETTING ANOTHER DISTRIBUTION OR A TREE DIAGRAM

$P(X \geq 2) = 0.6083$ & $P(X \leq 1) = 0.3917$



THE REQUIRED PROBABILITY IS GIVEN BY ALL THE BRANCHES ABOVE EXCEPT THE BOTTOM ONE

OR $1 - [P(X \leq 1)]^3 = 1 - 0.3917^3 = \underline{\underline{0.9399}}$

LYGB - MMS PAPER 0 - QUESTION 5

c) SETTING UP HYPOTHESES

- $H_0 : p = 0.1$
- $H_1 : p > 0.1$
- WHERE p REPRESENTS THE PROPORTION OF PINS WITH FLAWS IN THE ENTIRE POPULATION & NOT IN THE SAMPLE

TESTING AT 5% SIGNIFICANCE ON THE BASIS THAT $X=5$

$$P(X \geq 5) = 1 - P(X \leq 4)$$

... table ...

$$= 1 - 0.9568$$

$$= 0.0432$$

$$= 4.32 \%$$

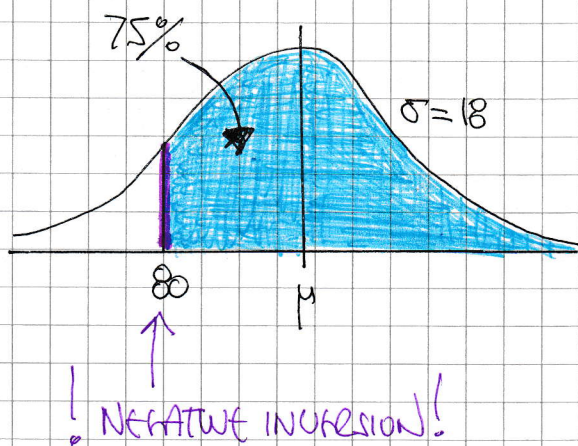
$$< 5\%$$

THERE IS SIGNIFICANT EVIDENCE AT 5% THAT THE PROPORTION OF PINS WITH FLAWS IS HIGHER THAN 10%

WE DO NOT HAVE ENOUGH EVIDENCE TO REJECT H_0

1YGB - MMS PAPER 0 - QUESTION 8

a) $X = \text{Paul's training time}$
 $X \sim N(\mu, 18^2)$



$$\Rightarrow P(X > 80) = 0.75$$

$$\Rightarrow P(Z > \frac{80 - \mu}{18}) = 0.75$$

INFUSION

$$\Rightarrow \frac{80 - \mu}{18} = -\Phi^{-1}(0.75)$$

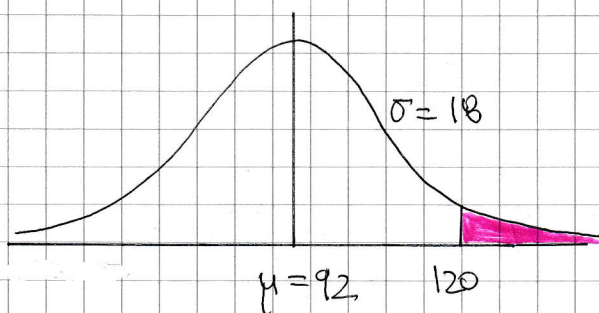
$$\Rightarrow \frac{80 - \mu}{18} = -0.674$$

$$\Rightarrow 80 - \mu = -12.132$$

$$\Rightarrow \mu = 92.132$$

$\therefore 92$ MINUTES

b)



$$P(X > 120)$$

$$= 1 - P(X < 120)$$

$$= 1 - P(Z < \frac{120 - 92}{18})$$

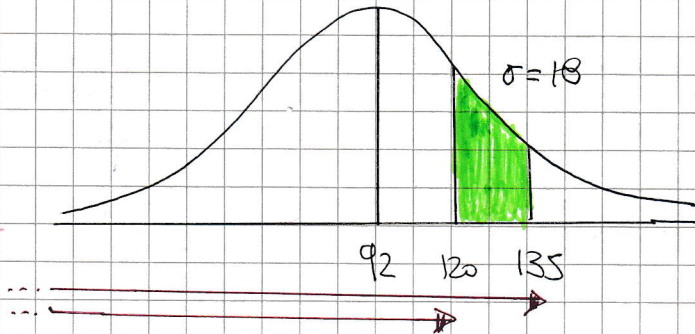
$$= 1 - \Phi(1.555\dots)$$

$$= 1 - 0.94009$$

$$\approx \underline{0.05999}$$

1YGB - NUIS PAPER 0 - QUESTION 6

c) WE ARE REQUIRED TO FIND



$$\begin{aligned} P(X < 135 | X > 120) &= \frac{P(X < 135 \cap X > 120)}{P(X > 120)} \\ &= \frac{P(120 < X < 135)}{P(X > 120)} \end{aligned}$$

$$\begin{aligned} P(120 < X < 135) &= P(X < 135) - P(X < 120) \\ &= P\left(z < \frac{135 - 92}{18}\right) - P\left(z < \frac{120 - 92}{18}\right) \\ &= \Phi(2.3888...) - \Phi(1.555...) \\ &= 0.99155 - 0.94009 \\ &= 0.05146 \end{aligned}$$

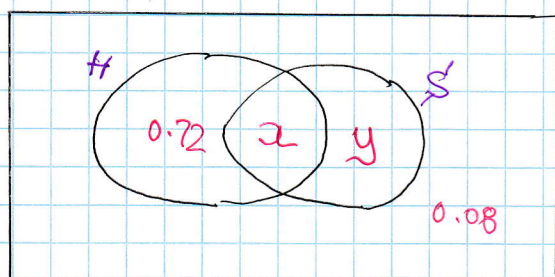
THE REQUIRED PROBABILITY IS $\frac{0.05146}{0.05999} \approx \underline{\underline{0.8578}}$

1YGB - MMS PAPER 0 - QUESTION 7

H = having a haircut
 S = having a shower

a) $P(H \cap S') = 0.72$, $P(S|H) = 0.2$, $P(S' \cap H') = 0.08$.

FILL IN A VENN DIAGRAM



$$\bullet \quad x + y + 0.72 + 0.08 = 1$$
$$x + y = 0.2$$

$$\bullet \quad P(S|H) = \frac{P(S \cap H)}{P(H)}$$
$$\Rightarrow 0.2 = \frac{x}{x + 0.72}$$

$$\Rightarrow 0.2(x + 0.72) = x$$

$$\Rightarrow 0.2x + 0.144 = x$$

$$\Rightarrow 0.144 = 0.8x$$

$$\Rightarrow x = 0.18$$

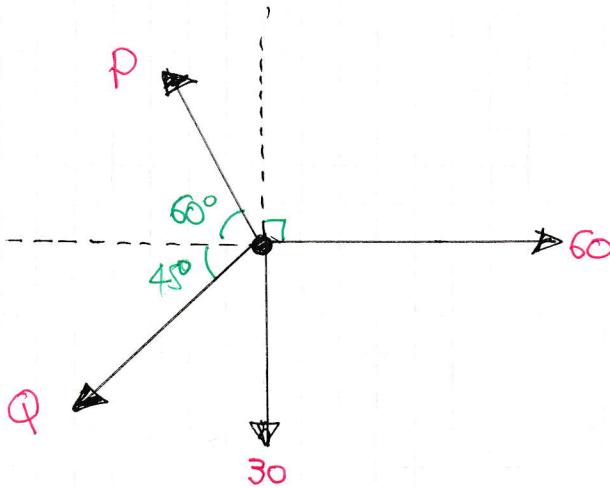
$$\text{and hence } y = 0.02$$

$$\therefore P(S \cap H) = x = 0.18$$

b) $P(S|H) = 0.2 = P(S) \leftarrow x + y = 0.2$

\therefore EVENTS ARE INDEPENDENT.

LYGB - NMS PAPER 0 - QUESTION 8



RESOLVING VERTICALLY AND HORIZONTALLY, WE OBTAIN

$$\uparrow: P \sin 60 = Q \sin 45 + 30$$

$$\rightarrow: P \cos 60 + Q \cos 45 = 60$$

TIDYING UP THE ABOVE EQUATIONS

$$\left. \begin{aligned} \frac{\sqrt{3}}{2}P &= \frac{\sqrt{2}}{2}Q + 30 \\ \frac{1}{2}P + \frac{\sqrt{2}}{2}Q &= 60 \end{aligned} \right\} \Rightarrow \left. \begin{aligned} \sqrt{3}P &= \sqrt{2}Q + 60 \\ P + \sqrt{2}Q &= 120 \end{aligned} \right\} \Rightarrow$$

$$\left. \begin{aligned} \sqrt{3}P &= \sqrt{2}Q + 60 \\ P &= 120 - \sqrt{2}Q \end{aligned} \right\} \Rightarrow \text{ADDING} \Rightarrow (\sqrt{3} + 1)P = 180$$

$$\Rightarrow P = \frac{180}{\sqrt{3} + 1}$$

$$\Rightarrow P = \frac{180(\sqrt{3} - 1)}{(\sqrt{3} + 1)(\sqrt{3} - 1)}$$

$$\Rightarrow P = \frac{180(\sqrt{3} - 1)}{2}$$

$$\Rightarrow P = 90(\sqrt{3} - 1)$$

FINALLY TO FIND Q WE HAVE

$$P + \sqrt{2}Q = 120$$

$$\sqrt{2}P + 2Q = 120\sqrt{2}$$

$$\sqrt{2}[90(\sqrt{3} - 1)] + 2Q = 120\sqrt{2}$$

$$45\sqrt{2}(\sqrt{3} - 1) + 2Q = 60\sqrt{2}$$

$$45\sqrt{6} - 45\sqrt{2} + 2Q = 60\sqrt{2}$$

$$2Q = 105\sqrt{2} - 45\sqrt{6}$$

$$\therefore Q = 15[7\sqrt{2} - 3\sqrt{6}]$$

1708 - MMS PAPER 0 - QUESTION 9

a) LOOKING AT THE FIRST JOURNEY (UP TO HALF A SECOND AFTER PROJECTION)

$$\begin{aligned} u &= 14 \text{ ms}^{-1} \\ a &= -9.8 \text{ ms}^{-2} \\ s &= ? \\ t &= 0.5 \text{ s} \\ v &= ? \end{aligned}$$

$$\begin{aligned} \bullet v &= u + at \\ \Rightarrow v &= 14 - 9.8 \times 0.5 \\ \Rightarrow v &= 9.1 \text{ ms}^{-1} \end{aligned}$$

$$\begin{aligned} \bullet s &= \frac{1}{2}(u+v)t \\ \Rightarrow s &= \frac{1}{2}(14+9.1) \times 0.5 \\ \Rightarrow s &= 5.775 \text{ m} \end{aligned}$$

b)

METHOD A

LOOKING AT THE JOURNEY UP

$$\begin{aligned} u &= 14 \text{ ms}^{-1} \\ a &= -9.8 \text{ ms}^{-2} \\ s &= ? \\ t &= ? \\ v &= 0 \end{aligned}$$

$$\begin{aligned} \bullet v &= u + at & \bullet v^2 &= u^2 + 2as \\ \Rightarrow 0 &= 14 - 9.8t & \Rightarrow 0 &= 14^2 + 2(-9.8)s \\ \Rightarrow 9.8t &= 14 & \Rightarrow 19.6s &= 196 \\ \Rightarrow t &= \frac{10}{7} & \Rightarrow s &= 10 \end{aligned}$$

LOOKING AT THE JOURNEY DOWN

$$\begin{aligned} u &= 0 \text{ ms}^{-1} \\ a &= +9.8 \text{ ms}^{-2} \\ s &= ? \\ t &= 2 - \frac{10}{9.8} = \frac{4}{9.8} \\ v &= \end{aligned}$$

$$\begin{aligned} \bullet s &= ut + \frac{1}{2}at^2 \\ \Rightarrow s &= \frac{1}{2}(9.8)\left(\frac{4}{9.8}\right)^2 \end{aligned}$$

METHOD B

LOOKING AT THE JOURNEY UP

$$\begin{aligned} u &= 14 \text{ ms}^{-1} \\ a &= -9.8 \\ s &= ? \\ t &= \\ v &= 0 \end{aligned}$$

$$\begin{aligned} \bullet v^2 &= u^2 + 2as \\ \Rightarrow 0 &= 14^2 + 2(-9.8)s \\ \Rightarrow 19.6s &= 196 \\ \Rightarrow s &= 10 \end{aligned}$$

NOW LOOKING AT THE ENTIRE JOURNEY

$$\begin{aligned} u &= 14 \text{ ms}^{-1} \\ a &= -9.8 \text{ ms}^{-2} \\ s &= ? \\ t &= 2 \\ v &= \end{aligned}$$

$$\begin{aligned} \bullet s &= ut + \frac{1}{2}at^2 \\ \Rightarrow s &= 14 \times 2 + \frac{1}{2}(-9.8) \times 2^2 \end{aligned}$$

IYGB - MMS PAPER 0 - QUESTION 9

$$\Rightarrow \underline{s = 1.6 \text{ m}}$$

∴ TOTAL DISTANCE COVERED IS

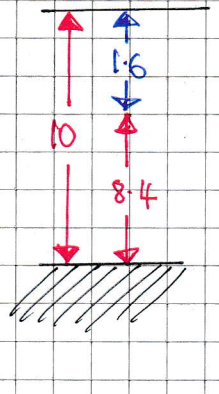
$$10 + 1.6 = \underline{11.6 \text{ m}}$$

$$\Rightarrow \underline{s = 28 - 19.6}$$

$$\Rightarrow \underline{s = 8.4 \text{ m}}$$

LOOKING AT THE DIAGRAM
THE REQUIRED DISTANCE IS

$$2 \times 10 - 8.4 = \underline{11.6 \text{ m}}$$



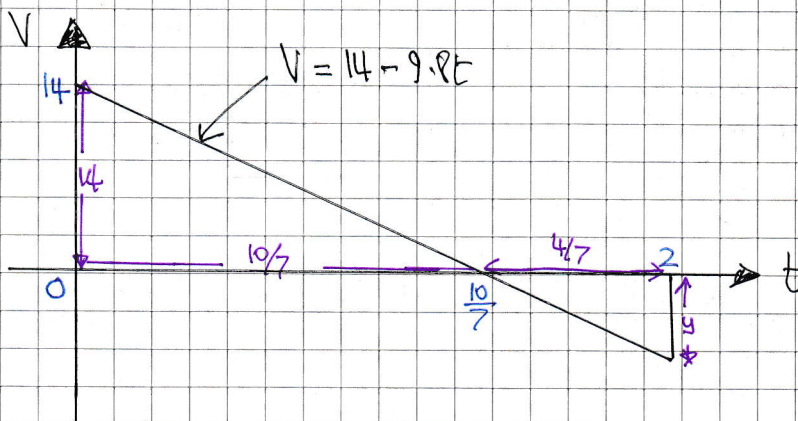
METHOD C

LOOKING AT THE JOURNEY TO THE HIGHEST POINT

$u = 14 \text{ ms}^{-1}$
$a = -9.8 \text{ ms}^{-2}$
$s =$
$t = ?$
$v = 0 \text{ ms}^{-1}$

- $v = u + at$
- $\Rightarrow 0 = 14 - 9.8t$
- $\Rightarrow 9.8t = 14$
- $\Rightarrow t = \frac{10}{7}$

NOW BY A VELOCITY TIME GRAPH



$$\begin{aligned} \therefore \text{TOTAL DISTANCE} &= \left(\frac{1}{2} \times 14 \times \frac{10}{7}\right) + \left(\frac{1}{2} \times \frac{4}{7} \times 5\right) \\ &= 10 + 1.6 \\ &= \underline{11.6 \text{ m}} \end{aligned}$$

BY SIMILAR TRIANGLES

$$\frac{4}{\frac{4}{7}} = \frac{14}{\frac{10}{7}}$$

$$\frac{10}{7} \times 7 = 8$$

$$y = \underline{5.6 \text{ ms}^{-1}}$$

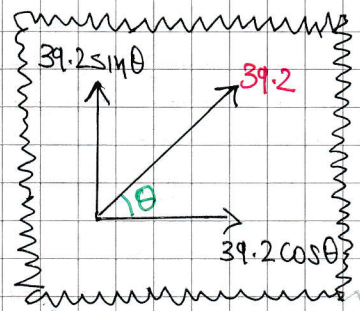
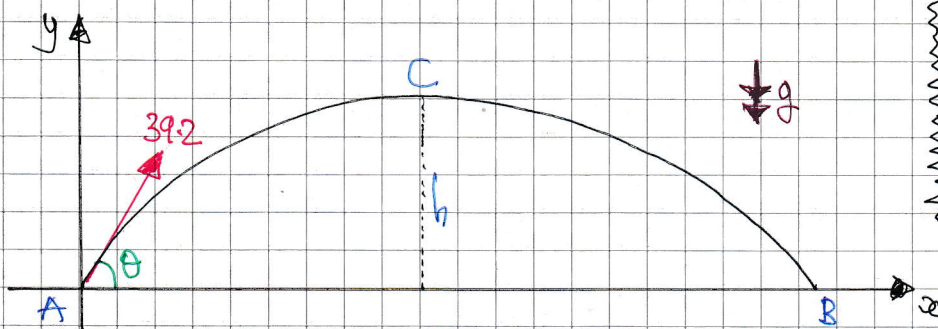
OR $v = u + at$

$$v = 14 - 9.8 \times 2$$

$$v = -5.6$$

LYGB - MMS PAPER 0 - QUESTION 10

START WITH A PROJECTILE DIAGRAM



LOOKING AT THE VERTICAL MOTION FROM A TO C

$$\begin{aligned} u &= 39.2 \sin \theta \text{ m s}^{-1} \\ a &= -9.8 \text{ m s}^{-2} \\ s &= ? \\ t &= 3 \text{ s} \\ v &= 0 \text{ m s}^{-1} \end{aligned}$$

a) $v = u + at$

$$\Rightarrow 0 = 39.2 \sin \theta - 9.8 \times 3$$

$$\Rightarrow 29.4 = 39.2 \sin \theta$$

$$\Rightarrow \sin \theta = \frac{3}{4}$$

As required

b) $s = ut + \frac{1}{2}at^2$

$$\Rightarrow s = (39.2 \sin \theta) \times 3 + \frac{1}{2}(-9.8) \times 3^2$$

$$\Rightarrow s = \left(39.2 \times \frac{3}{4} \times 3\right) - (4.9 \times 9)$$

$$\Rightarrow s = 88.2 - 44.1$$

$$\Rightarrow s = 44.1 \text{ m}$$

c) BY SYMMETRY THE TOTAL FLIGHT TIME WILL BE $2 \times 3 = 6$ SECONDS

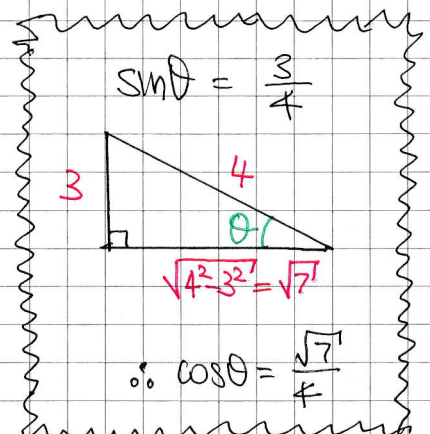
LOOKING AT THE HORIZONTAL DISPLACEMENT

$$\text{DISTANCE} = \text{CONSTANT SPEED} \times \text{TIME}$$

$$\text{DISTANCE} = 39.2 \cos \theta \times 6$$

$$\text{DISTANCE} = 39.2 \times \frac{\sqrt{7}}{4} \times 6$$

$$\text{DISTANCE} \approx 155.57 \text{ m}$$



IVGB - MMS PAPER 0 - QUESTION 10

d) LEAST SPEED OCCURS AT THE HIGHEST POINT OF THE PATH, POINT C

AT THAT POINT (C) THERE IS ONLY HORIZONTAL VELOCITY

$$\therefore \text{LEAST SPEED} = 39.2 \cos \theta$$

$$= 39.2 \times \frac{\sqrt{7}}{4}$$

$$\approx \underline{25.93 \text{ m s}^{-1}}$$

IXGB - MMS PAPER 0 - QUESTION 11

● USING THE EQUATION $\underline{r} = \underline{r}_0 + \underline{u}t + \frac{1}{2}\underline{a}t^2$ FOR EACH PARTICLE.

$$\underline{r}_A = \begin{pmatrix} 7 \\ -2 \end{pmatrix} + \begin{pmatrix} 2 \\ 3 \end{pmatrix}t + \frac{1}{2}\begin{pmatrix} 0.1 \\ 0.2 \end{pmatrix}t^2$$

$$\underline{r}_B = \underline{r}_0 + \begin{pmatrix} 3 \\ 5 \end{pmatrix}t + \frac{1}{2}\begin{pmatrix} -0.2 \\ 0.3 \end{pmatrix}t^2$$

● IT IS GIVEN THAT $\underline{r}_A = \underline{r}_B$ WHEN $t=10$

$$\begin{pmatrix} 7 \\ -2 \end{pmatrix} + 10\begin{pmatrix} 2 \\ 3 \end{pmatrix} + \frac{1}{2} \times 100 \begin{pmatrix} 0.1 \\ 0.2 \end{pmatrix} = \underline{r}_0 + 10\begin{pmatrix} 3 \\ 5 \end{pmatrix} + \frac{1}{2} \times 100 \begin{pmatrix} -0.2 \\ 0.3 \end{pmatrix}$$

$$\begin{pmatrix} 7 \\ -2 \end{pmatrix} + \begin{pmatrix} 20 \\ 30 \end{pmatrix} + \begin{pmatrix} 5 \\ 10 \end{pmatrix} = \underline{r}_0 + \begin{pmatrix} 30 \\ 50 \end{pmatrix} + \begin{pmatrix} -10 \\ 15 \end{pmatrix}$$

$$\begin{pmatrix} 32 \\ 38 \end{pmatrix} = \underline{r}_0 + \begin{pmatrix} 20 \\ 65 \end{pmatrix}$$

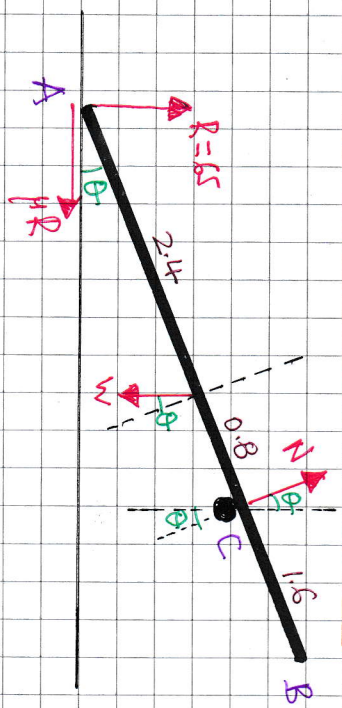
$$\underline{r}_0 = \begin{pmatrix} 12 \\ -27 \end{pmatrix}$$

∴ IT STARTS FROM $(12\hat{i} - 27\hat{j})$

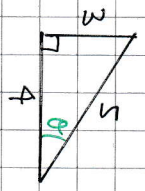
1YGB - NMS PAPER 0 - QUESTION 12

-1-

START WITH A DETAILED DIAGRAM



$\tan \theta = \frac{3}{4}$ $\mu = \frac{9}{13}$
 $R = 65$



$\sin \theta = \frac{3}{5}$
 $\cos \theta = \frac{4}{5}$

FORM 3 EQUATIONS BY RESOLVING & TAKING MOMENTS

- (I): $R + N \cos \theta = W$ (I)
 (II): $\mu R = N \sin \theta$ (II)
 (III): $W \cos \theta \times 2.4 = N \times 3.2$ (III)

b) FROM EQUATION (II) DIRECTLY

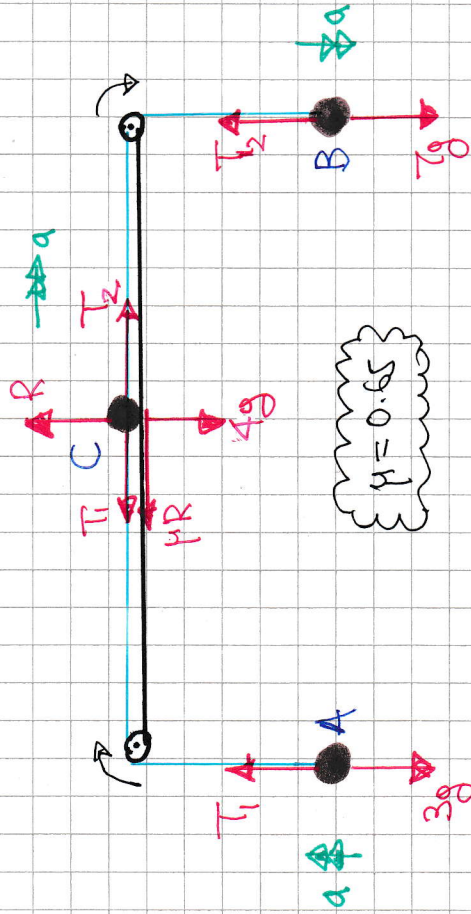
$\Rightarrow \mu R = N \sin \theta$
 $\Rightarrow \frac{9}{13} \times 65 = N \times \frac{3}{5}$
 $\Rightarrow 45 = \frac{3}{5} N$
 $\Rightarrow N = 75$

a) EITHER USING (I) OR (III) GIVES

$R + N \cos \theta = W$ OR $W \cos \theta \times 2.4 = N \times 3.2$
 $\Rightarrow 65 + 75 \times \frac{4}{5} = W$ $\Rightarrow W \times \frac{4}{5} \times 2.4 = 75 \times 3.2$
 $\Rightarrow 65 + 60 = W$ $\Rightarrow 192 W = 240$
 $\Rightarrow W = 125$ $\Rightarrow W = 125$

IXGB - MMS PAPER 0 - QUESTION 13

START WITH A DIAGRAM



WORKING AT THE EQUATION OF MOTION FOR EACH PARTICLE

$$\begin{aligned} \text{(A): } T_1 - 3g &= 3a \\ \text{(B): } T_2 - T_1 &= 7a \\ \text{(C): } T_2 - T_1 - \mu R &= 4a \end{aligned} \Rightarrow \boxed{T_1 = 3a + 3g}$$

$$\begin{aligned} \text{(B): } T_2 - T_1 &= 7a \\ \text{(C): } T_2 - (3a + 3g) - \mu(4g) &= 4a \end{aligned} \Rightarrow$$

$$\begin{aligned} \text{(B): } -T_2 + 7g &= 7a \\ \text{(C): } T_2 - 3a - 3g - \frac{13}{5}g &= 4a \end{aligned} \left. \begin{array}{l} \\ \text{ADDING} \end{array} \right\}$$

$$\Rightarrow \frac{7}{5}g - 3a = 11a$$

$$\Rightarrow 14a = \frac{7}{5}g$$

$$\Rightarrow a = \frac{1}{10}g = \underline{0.98 \text{ m/s}^2}$$

FINALLY WE HAVE

$$\begin{aligned} \text{(A): } T_1 &= 3a + 3g \\ T_1 &= 3(0.98) + 3g \\ T_1 &= \underline{32.34 \text{ N}} \\ \text{(B): } T_2 &= 7g - 7a \\ T_2 &= 7g - 7(0.98) \\ T_2 &= \underline{61.74} \end{aligned}$$

-1-

1YGB - MMS PAPER 0 - QUESTION 14

$$v = t^2 - 2t - 24, \quad t \geq 0 \quad \text{SUBJECT TO } t=3, x=0$$

a) OBTAIN THE ACCELERATION BY DIFFERENTIATING THE VELOCITY

$$a = \frac{dv}{dt} = \frac{d}{dt}(t^2 - 2t - 24)$$

$$a = 2t - 2$$

$$a \Big|_{t=3} = 2 \times 3 - 2$$

$$a \Big|_{t=3} = \underline{4 \text{ ms}^{-2}}$$

b) FIND THE TIMES WHEN $v=0$

$$\Rightarrow 0 = t^2 - 2t - 24$$

$$\Rightarrow 0 = (t+4)(t-6)$$

$$\Rightarrow t = \begin{cases} -4 \text{ s} \\ 6 \text{ s} \end{cases}$$

USING INTEGRATION TO OBTAIN AN EXPRESSION FOR THE DISPLACEMENT x

$$\Rightarrow x = \int v \, dt = \int t^2 - 2t - 24 \, dt$$

$$\Rightarrow x = \frac{1}{3}t^3 - t^2 - 24t + C$$

APPLY CONDITION $t=3, x=0$

$$\Rightarrow 0 = \frac{1}{3} \times 3^3 - 3^2 - 24 \times 3 + C$$

$$\Rightarrow 0 = 9 - 9 - 72 + C$$

$$\Rightarrow C = 72$$

$$\Rightarrow x = \frac{1}{3}t^3 - t^2 - 24t + 72$$

LYGB - MMS PAPER 0 - QUESTION 14

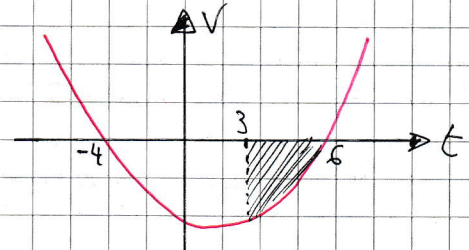
FINALLY WITH $t=6$

$$\begin{aligned} x(6) &= \frac{1}{3} \times 6^3 - 6^2 - 24 \times 6 + 72 \\ &= 72 - 36 - 144 + 72 \\ &= -36 \end{aligned}$$

∴ A DISTANCE OF 36m FROM 0

ALTERNATIVE FOR PART (b)
USING VELOCITY TIME GRAPH

$$\begin{aligned} v &= t^2 - 2t - 24 \\ v &= (t+4)(t-6) \end{aligned}$$



$$\begin{aligned} \text{DISPLACEMENT} &= \int_3^6 t^2 - 2t - 24 dt \\ &= \left[\frac{1}{3}t^3 - t^2 - 24t \right]_3^6 \\ &= (72 - 36 - 144) - (9 - 9 - 72) \\ &= -36 \text{ AS BEFORE} \end{aligned}$$

4) USING $x = \frac{1}{3}t^3 - t^2 - 24t + 72$ WITH $x=0$ & NOTING $t=3$ IS A KNOWN SOLUTION (GIVEN AS CONDITION)

$$\Rightarrow \frac{1}{3}t^3 - t^2 - 24t + 72 = 0$$

$$\Rightarrow t^3 - 3t^2 - 72t + 216 = 0$$

$$\Rightarrow t^2(t-3) - 72(t-3) = 0 \quad (\text{OR USE ALGEBRAIC DIVISION})$$

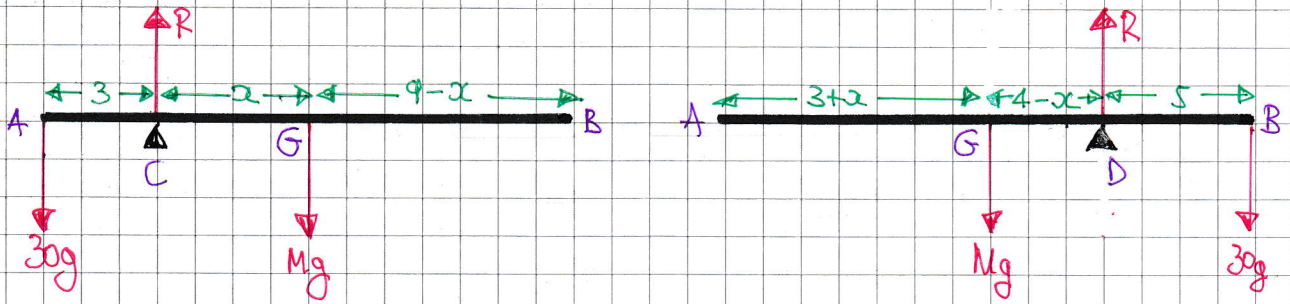
$$\Rightarrow (t-3)(t^2 - 72)$$

$$\Rightarrow t=3 \quad \text{OR} \quad t^2=72$$

$$\therefore t = +\sqrt{72} \approx 8.49 \text{ s}$$

1XGB - MMS PAGE 0 - QUESTION 15

(a/b) START WITH TWO SEPARATE DIAGRAMS SHOWING EACH OF THE TWO CASES



NOTE THAT $R = 30g + Mg$ IN BOTH CASES AND $|AG| = 3 + 2$

TAKING MOMENTS ABOUT C & ABOUT D IN EACH CASE TO ELIMINATE R

$$\curvearrowleft C : 30g \times 3 = Mg \times 2$$

$$\underline{M \times 2 = 90}$$

$$\curvearrowright D : Mg(4-x) = 30g \times 5$$

$$M(4-x) = 150$$

$$\underline{4M - Mx = 150}$$

$$\Rightarrow 4M - 90 = 150$$

$$\Rightarrow 4M = 240$$

$$\Rightarrow \underline{M = 60}$$

NOW WE CAN FIND THE VALUE OF x & SUBSEQUENTLY THE DISTANCE $|A|$

$$\Rightarrow Mx = 90$$

$$\Rightarrow 60x = 90$$

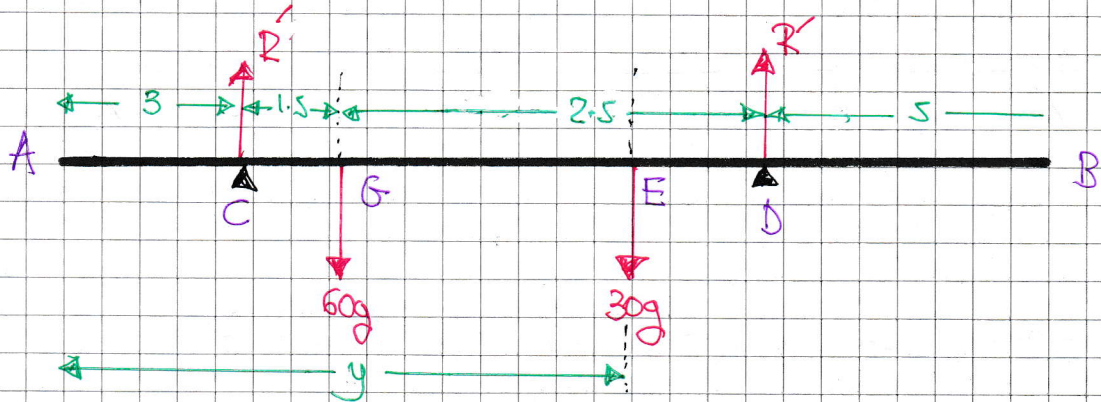
$$\Rightarrow x = 1.5$$

$$\therefore |AG| = 3 + x$$

$$\underline{|AG| = 4.5 \text{ m}}$$

IVGB - MMS PAPER 0 - QUESTION 15

c) START WITH A NEW DIAGRAM



• $2R' = 60g + 30g$

$2R' = 90g$

$R' = 45g$

• $\curvearrowright A : (60g \times 4.5) + (30g \times y) = (R' \times 3) + (R' \times 7)$

$270g + 30gy = 3R' + 7R'$

$270g + 30gy = 10R'$

$270g + 30gy = 10 \times 45g$

$270 + 30y = 450$

$27 + 3y = 45$

$9 + y = 15$

$y = 6 \text{ m}$

