

IYGB - FM2 PAPER Q - QUESTION 1

START BY FINDING THE AREA

$$\text{AREA} = \int_0^1 6x^2 dx = \left[2x^3 \right]_0^1 = 2$$

USING "STANDARD" FORMULAS

$$\bar{x} = \frac{\int_a^b xy dx}{\int_a^b y dx}$$

$$\bar{x} = \frac{\int_0^1 x(6x^2) dx}{2}$$

$$\bar{x} = \frac{1}{2} \int_0^1 6x^3 dx$$

$$\bar{x} = \frac{1}{2} \left[\frac{3}{2} x^4 \right]_0^1$$

$$\bar{x} = \frac{3}{4}$$

$$\bar{y} = \frac{\int \frac{1}{2} y^2 dx}{\int_a^b y dx}$$

$$\bar{y} = \frac{\int_0^1 \frac{1}{2} (6x^2)^2 dx}{2}$$

$$\bar{y} = \frac{1}{2} \int_0^1 18x^4 dx$$

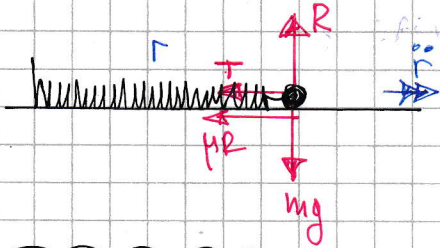
$$\bar{y} = \frac{1}{2} \left[\frac{18}{5} x^5 \right]_0^1$$

$$\bar{y} = \frac{9}{5}$$

∴ $\left(\frac{3}{4}, \frac{9}{5} \right)$

NYGB - FM2 PAPER Q - QUESTION 2

DRAWING A DIAGRAM WITH PARTICLE SLIPPING OUTWARDS (ω MAX)



$$\begin{aligned} m &= 0.5 \text{ kg} \\ r &= 0.75 \\ l &= 0.6 \\ \lambda &= 15 \\ \mu &= 0.45 \end{aligned}$$

$$\bullet R = mg$$

$$\bullet m\ddot{r} = -T - \mu R$$

$$m(-\omega^2 r) = -\frac{\lambda}{l} r - \mu(mg)$$

$$m\omega^2 r = \frac{\lambda}{l} r + \mu mg$$

$$0.5\omega^2(0.75) = \frac{15}{0.6}(0.75 - 0.6) + 0.45 \times 0.5 \times 9.8$$

$$\frac{3}{8}\omega^2 = \frac{15}{4} + 2.205$$

$$\frac{3}{8}\omega^2 = 5.955$$

$$\omega^2 = 15.88$$

$$\omega_{\text{MAX}} = 3.98 \text{ rad s}^{-1}$$

TO FIND ω_{MIN} EVERYTHING IS THE SAME, EXCEPT FRICTION IS ACTING OUTWARDS

$$\frac{3}{8}\omega^2 = \frac{15}{4} - 2.205$$

$$\frac{3}{8}\omega^2 = 1.545$$

$$\omega^2 = 4.12$$

$$\omega_{\text{MIN}} \approx 2.03 \text{ rad s}^{-1}$$

- 1 -

IVGB - FM2 PART 2 Q - QUESTION 3

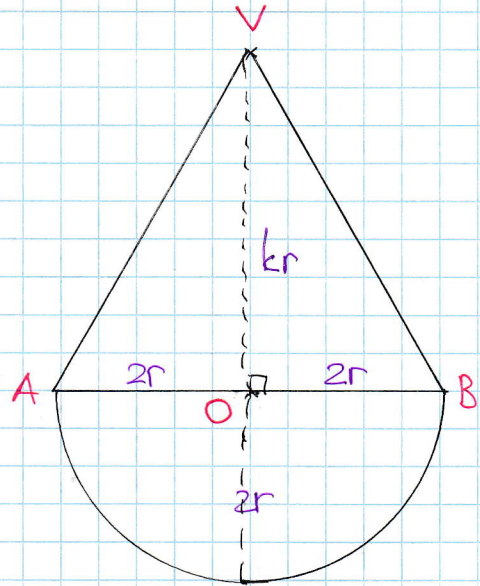
a) LOOKING AT THE DIAGRAM

• VOLUME OF THE CONE

$$= \frac{1}{3} \pi (2r)^2 (kr)$$

$$= \frac{4}{3} \pi kr^3$$

$$= \left(\frac{4}{3} \pi r^3 \right) k$$






• VOLUME OF HEMISPHERE

$$= \frac{1}{2} \times \frac{4}{3} \pi (2r)^3$$

$$= \frac{16}{3} \pi r^3$$

$$= 4 \left(\frac{4}{3} \pi r^3 \right)$$

ORGANIZE RESULTS (MOMENTS) IN A TABLE

			
MASS RATIO	k	4	k+4
DISTANCE FROM O	$+\frac{1}{4}(kr)$	$-\frac{3}{8}(2r)$	\bar{y}

$$\Rightarrow (k+4) \bar{y} = \frac{1}{4} k^2 r - 3r$$

$$\Rightarrow (k+4) \bar{y} = \frac{1}{4} r (k^2 - 12)$$

$$\Rightarrow \bar{y} = \frac{(k^2 - 12)r}{4(k+4)}$$

AS REQUIRED

1YGB - FM2 PAPER Q - QUESTION 3

b) LOOKING AT THE DIAGRAM AGAIN

$$\Rightarrow \tan \theta = \frac{y}{2r}$$

$$\Rightarrow \frac{3}{10} = \frac{\frac{(k^2-12)r}{4(k+4)}}{2r}$$

$$\Rightarrow \frac{3}{10} = \frac{(k^2-12)r}{8r(k+4)}$$

$$\Rightarrow 24(k+4) = 10(k^2-12)$$

$$\Rightarrow 12(k+4) = 5(k^2-12)$$

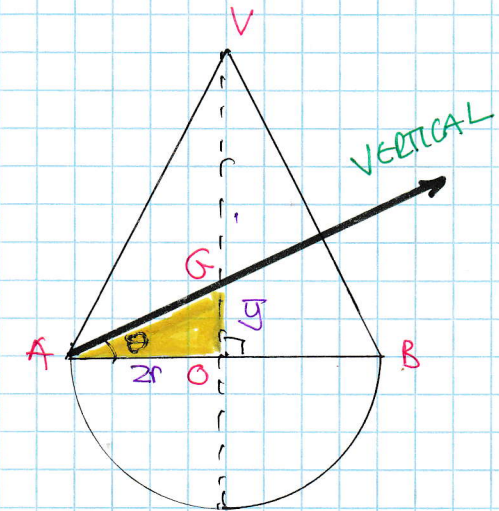
$$\Rightarrow 12k + 48 = 5k^2 - 60$$

$$\Rightarrow 0 = 5k^2 - 12k - 108$$

QUADRATIC FORMULA OR FACTORIZATION YIELDS

$$\Rightarrow 0 = (5k + 18)(k - 6)$$

$$\Rightarrow k = \begin{cases} 6 \\ -\frac{18}{5} \end{cases}$$

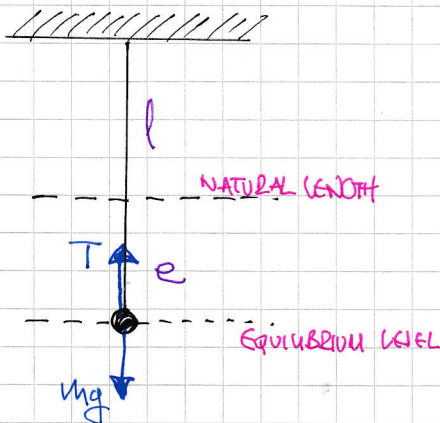


$\therefore k = 6$

— 1 —

LYGB - FMZ PAPER Q - QUESTION 4

a) DIAGRAM IN EQUILIBRIUM



$$\begin{aligned} m &= 0.5 \\ l &= 0.8 \\ \lambda &= 90 \end{aligned}$$

$$\Rightarrow T = mg$$

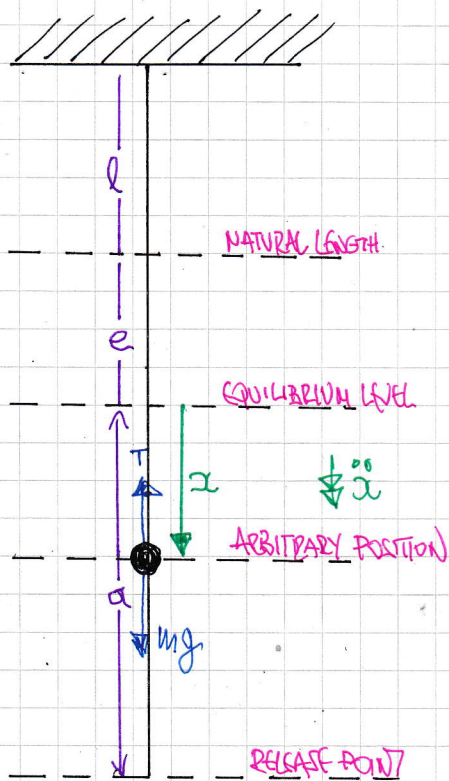
$$\Rightarrow \frac{\lambda}{l} e = mg$$

$$\Rightarrow e = \frac{mg l}{\lambda}$$

$$\Rightarrow e = \frac{0.5 \times 9.8 \times 0.8}{90}$$

$$\Rightarrow e = \frac{49}{1125}$$

DIAGRAM WITH PARTICLE IN AN ARBITRARY POSITION BELOW EQUILIBRIUM LEVEL



$$\Rightarrow m \ddot{x} = mg - T$$

$$\Rightarrow m \ddot{x} = mg - \frac{\lambda}{l} (e+x)$$

$$\Rightarrow m \ddot{x} = mg - \frac{\lambda e}{l} - \frac{\lambda}{l} x$$

$$\Rightarrow m \ddot{x} = mg - \frac{\lambda}{l} \left(\frac{mg l}{\lambda} \right) - \frac{\lambda}{l} x$$

$$\Rightarrow m \ddot{x} = \cancel{mg} - \cancel{mg} - \frac{\lambda}{l} x$$

$$\Rightarrow \ddot{x} = - \frac{\lambda}{ml} x$$

$$\Rightarrow \ddot{x} = - \frac{90}{0.5 \times 0.8} x$$

$$\Rightarrow \ddot{x} = -225x$$

IE. INDEED S.H.M WITH $\omega = 15$,
ABOUT THE EQUILIBRIUM POSITION

1XG-B - FM2 PAGE 9 - QUESTION 4

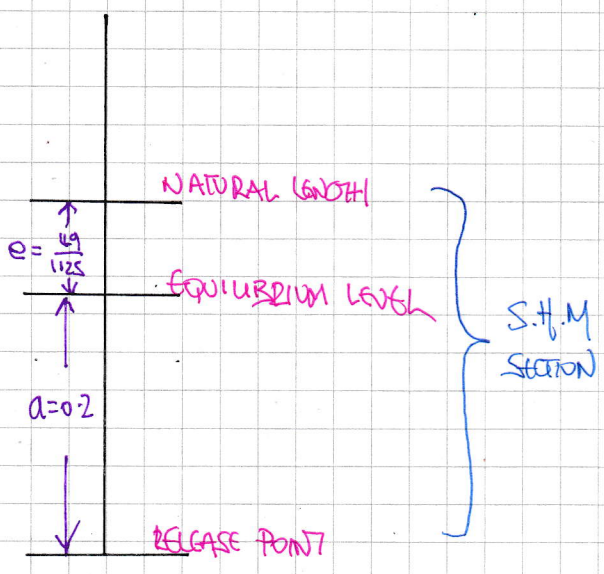
b) IF SPEED THROUGH EQUILIBRIUM POSITION IS 3 m s^{-1} , THEN $V_{\text{MAX}} = 3$

$$\Rightarrow |V|_{\text{MAX}} = a\omega$$

$$\Rightarrow 3 = 9 \times 15$$

$$\Rightarrow a = 0.2$$

LOOKING AT THE DIAGRAM



$$V^2 = \omega^2 (a^2 - x^2)$$

$$V^2 = 225 \left(0.2^2 - \left(\frac{49}{1125} \right)^2 \right)$$

$$V^2 = 8.573155 \dots$$

$$V = 2.927995143 \dots$$

● NEXT FALLING UNDER GRAVITY

$$\left\{ \begin{array}{l} u = 2.9279 \dots \\ a = -9.8 \\ s = ? \\ t = \\ v = 0 \end{array} \right\}$$

$$v^2 = u^2 + 2as$$

$$0 = 8.573155 \dots + 2(-9.8)s$$

$$s = 0.437405 \dots$$

● REQUIRED TOTAL DISTANCE

$$0.2 + \frac{49}{1125} + 0.4374 \dots$$

$$\approx 0.681 \text{ m}$$

(3 s.f.)

IYGB - FM2 PAPER Q - QUESTION 5

a) STANDARD METHODOLOGY USING CALCULUS

$$\ddot{x} = \frac{60}{(t+3)^2}$$

$$t=0, v=\dot{x}=0, x=0$$

↑
ARBITRARY

$$\Rightarrow \frac{dv}{dt} = \frac{60}{(t+3)^2}$$

$$\Rightarrow \int 1 dv = \int \frac{60}{(t+3)^2} dt$$

$$\Rightarrow \int_{v=0}^v 1 dv = \int_{t=0}^t 60(t+3)^{-2} dt$$

$$\Rightarrow [v]_0^v = [-60(t+3)^{-1}]_0^t$$

$$\Rightarrow v - 0 = \left[\frac{60}{t+3} \right]_0^t$$

$$\Rightarrow v = 20 - \frac{60}{t+3}$$

b) CONTINUING BY WRITING $v = \frac{dx}{dt}$

$$\Rightarrow \frac{dx}{dt} = 20 - \frac{60}{t+3}$$

$$\Rightarrow \int 1 dx = \int \left(20 - \frac{60}{t+3} \right) dt$$

$$\Rightarrow \int_{x=0}^x 1 dx = \int_{t=0}^{t=6} \left(20 - \frac{60}{t+3} \right) dt$$

$$\Rightarrow [x]_0^x = [20t - 60 \ln(t+3)]_0^6$$

$$\Rightarrow x - 0 = (120 - 60 \ln 9) - (0 - 60 \ln 3)$$

$$\Rightarrow x = 120 - 60 \ln 9 + 60 \ln 3$$

$$\Rightarrow x = 120 - 60 [\ln 9 - \ln 3]$$

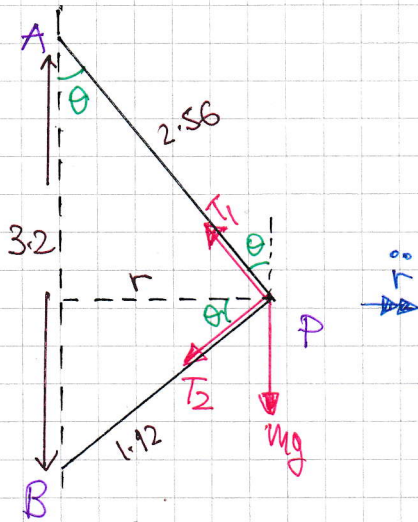
$$\Rightarrow x = 120 - 60 \ln 3$$

$$\Rightarrow x = 60(2 - \ln 3)$$

AS REQUIRED

IYGB - FM2 PAPER Q-QUESTION 6

START WITH A DETAILED DIAGRAM



BY INSPECTION THE TRIANGLE IS 3:4:5
(OR USE THE COSINE RULE TO FIND $\cos\theta$)

$$1.12 : 2.56 : 3.2 \quad \rightarrow \times 10$$

$$112 : 256 : 320 \quad \rightarrow \div 64$$

$$3 : 4 : 5$$

$\therefore \sin\theta = \frac{3}{5}$
 $\cos\theta = \frac{4}{5}$
 $\tan\theta = \frac{3}{4}$

VERTICALLY (EQUILIBRIUM)

$$T_1 \cos\theta = T_2 \sin\theta + mg$$

$$\frac{4}{5} T_1 = \frac{3}{5} T_2 + mg \quad \rightarrow \times 5$$

$$4T_1 = 3T_2 + 5mg$$

$$12T_1 = 9T_2 + 15mg \quad \rightarrow \times 3$$

RADIALLY (ACCELERATION)

$$m\omega^2 r = -T_1 \sin\theta - T_2 \cos\theta$$

$$m(-\omega^2 r) = -\frac{3}{5} T_1 - \frac{4}{5} T_2 \quad \rightarrow \times 5$$

$$5m\omega^2 r = 3T_1 + 4T_2$$

$$20m\omega^2 r = 12T_1 + 16T_2 \quad \rightarrow \times 4$$

SOIVING BY SUBSTITUTION - WE ONLY NEED T_2 TO SET ≥ 0

$$\Rightarrow 20m\omega^2 r = 9T_2 + 15mg + 16T_2$$

$$\Rightarrow 20m\omega^2 r - 15mg = 25T_2$$

NOW T_2 "MUST HAVE TENSION", IF $T_2 \geq 0$

$$\Rightarrow 20m\omega^2 r - 15mg \geq 0$$

$$\Rightarrow 4\omega^2 r - 3g \geq 0$$

-2-

YGB - FM2 PAPER Q-QUESTION 6

Now looking at the diagram $\Gamma = 2.56 \sin \theta$

$$\Gamma = 2.56 \times \frac{3}{5}$$

$$\Gamma = 1.536$$

$$\Rightarrow 4\omega^2 \geq 3g$$

$$\Rightarrow 4\omega^2 \times 1.536 \geq 3 \times 9.8$$

$$\Rightarrow \omega^2 \geq \frac{1225}{256}$$

$$\Rightarrow \omega \geq \frac{35}{16}$$

$$\Rightarrow \frac{1}{\omega} \leq \frac{16}{35}$$

$$\Rightarrow \frac{32\pi}{\omega} \leq \frac{32\pi}{35}$$

$$\Rightarrow \underline{\text{Period}} \leq \frac{32\pi}{35} \quad \text{As required}$$

196B - FM2 PAPER Q - QUESTION 7

$$\bullet T = \frac{\pi}{3}$$

$$\Rightarrow \frac{2\pi}{\omega} = \frac{\pi}{3}$$

$$\Rightarrow \underline{\omega = 6}$$

$$\bullet V^2 = \omega^2(a^2 - x^2)$$

$$\Rightarrow 2.16^2 = 6^2(a^2 - 0.48^2)$$

$$\Rightarrow 0.1296 = a^2 - 0.48^2$$

$$\Rightarrow a^2 = 0.36$$

$$\Rightarrow \underline{a = 0.6}$$

NEXT FIND THE VALUE OF x WHEN $V = 2.88$

$$\Rightarrow V^2 = \omega^2(a^2 - x^2)$$

$$\Rightarrow 2.88^2 = 6^2(0.6^2 - x^2)$$

$$\Rightarrow 0.2304 = 0.6^2 - x^2$$

$$\Rightarrow x^2 = 0.1296$$

$$\Rightarrow \underline{|x| = 0.36}$$

NOW USING A DISPLACEMENT-TIME RELATIONSHIP WITH $t=0$ AT THE END-POINT OF THE OSCILLATION

$$x = a \cos \omega t$$

$$x = \frac{3}{5} \cos 6t$$

$$0.36 = 0.6 \cos 6t$$

$$\cos 6t = 0.6$$

$$6t = \arccos(0.6) \quad (\text{FIRST POSITIVE SOLUTION})$$

$$t = \frac{1}{6} \arccos(0.6) \approx 0.154549 \dots$$

$$\therefore \text{REQUIRED TIME} = \text{PERIOD} - 4(0.154549 \dots) \approx \underline{0.429}$$

