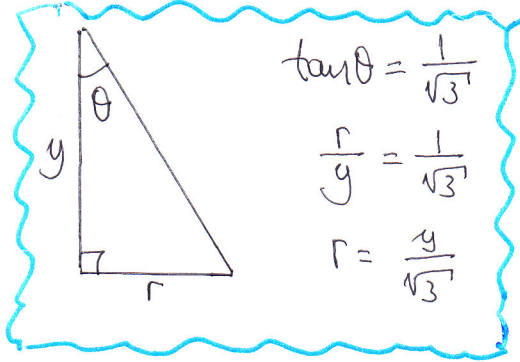


# C4, IVGB, PAPER T

1. a)



●  $\frac{dV}{dt} = 3.2$  CONSTANT

∴  $V = 3.2t$

● SHAPE IS CONICAL

⇒ " $\frac{1}{3}\pi r^2 h$ " =  $3.2t$

⇒  $\frac{1}{3}\pi \left(\frac{y}{\sqrt{3}}\right)^2 y = \frac{16}{5}t$

⇒  $\frac{1}{9}\pi y^3 = \frac{16}{5}t$

⇒  $y^3 = \frac{144t}{5\pi}$  ~~As required~~

b) H  $y^3 = \frac{144}{5\pi} t$

⇒  $\frac{d}{dt}(y^3) = \frac{d}{dt}\left(\frac{144}{5\pi}t\right)$

⇒  $3y^2 \frac{dy}{dt} = \frac{144}{5\pi}$

⇒  $y^2 \frac{dy}{dt} = \frac{48}{5\pi}$

⇒  $y^6 \left(\frac{dy}{dt}\right)^3 = \left(\frac{48}{5\pi}\right)^3$

⇒  $\left(\frac{144t}{5\pi}\right)^2 \left(\frac{dy}{dt}\right)^3 = \left(\frac{48}{5\pi}\right)^3$

⇒  $\left(\frac{dy}{dt}\right)^3 = \left(\frac{48}{5\pi}\right)^3 \times \left(\frac{5\pi}{144t}\right)^2$

⇒  $\left(\frac{dy}{dt}\right)^3 = \frac{48^3}{5\pi \times (144t)^2}$

⇒  $\left(\frac{dy}{dt}\right)^3 = \frac{16}{15\pi t^2}$

⇒  $\left[\frac{dy}{dt}\right]_{t=60}^3 = \frac{16}{15\pi \times 60^2}$

⇒  $\left[\frac{dy}{dt}\right]_{t=60} = \frac{1}{3375\pi}$

⇒  $\frac{dy}{dt}\bigg|_{t=60} = \sqrt[3]{\frac{1}{3375\pi}}$

⇒  $\frac{dy}{dt}\bigg|_{t=60} = \frac{1}{15\pi^{1/3}}$

⇒  $\frac{dy}{dt}\bigg|_{t=60} = \frac{1}{15} \pi^{-1/3}$  ~~As required~~

As required

# C4, YGB, PART T

- 2 -

II) Now  $A = \pi r \sqrt{r^2 + h^2}$

$$\Rightarrow A = \pi \left( \frac{y}{\sqrt{3}} \right) \left[ \left( \frac{y}{\sqrt{3}} \right)^2 + y^2 \right]^{\frac{1}{2}}$$

$$\Rightarrow A = \pi \left( \frac{y}{\sqrt{3}} \right) \left( \frac{4}{3} y^2 \right)^{\frac{1}{2}}$$

$$\Rightarrow A = \pi \left( \frac{y}{\sqrt{3}} \right) \left( \frac{2y}{\sqrt{3}} \right)$$

$$\Rightarrow A = \frac{2}{3} \pi y^2$$

Thus  $\frac{dA}{dt} = \frac{dA}{dy} \times \frac{dy}{dt}$

$$\Rightarrow \frac{dA}{dt} = \left( \frac{4}{3} \pi y \right) \times \left( \frac{dy}{dt} \right)$$

$$\Rightarrow \left( \frac{dA}{dt} \right)^3 = \frac{64}{27} \pi y^3 \times \left( \frac{dy}{dt} \right)^3$$

$$\Rightarrow \left( \frac{dA}{dt} \right)^3 = \frac{64 \pi^3}{27} \times \frac{144 t}{5 \pi} \times \frac{16}{15 \pi t^2}$$

$$\Rightarrow \left( \frac{dA}{dt} \right)^3 = \frac{64 \pi \times 144 \times 16}{27 \times 5 \times 15 t}$$

$$\Rightarrow \left[ \frac{dA}{dt} \right]_{t=60}^3 = \frac{64 \pi \times 144 \times 16}{27 \times 5 \times 15 \times 60}$$

$$\Rightarrow \left[ \frac{dA}{dt} \right]_{t=60}^3 = \frac{4096 \pi}{3375}$$

$$\Rightarrow \frac{dA}{dt} \Big|_{t=60} = \sqrt[3]{\frac{4096 \pi}{3375}}$$

$$\Rightarrow \frac{dA}{dt} \Big|_{t=60} = \frac{16}{15} \pi^{\frac{1}{3}}$$

AS REQUIRED

$$2. \int_0^{\frac{\pi}{4}} \frac{\sqrt{3}}{2 + \sin 2x} dx = \dots \text{ BY SUBSTITUTION}$$

$$= \int_{\frac{\pi}{6}}^{\frac{\pi}{3}} \frac{\sqrt{3}}{2 + \sin 2x} \left( \frac{\sqrt{3} \sec^2 \theta}{2 \sec^2 x} d\theta \right)$$

$$= \int_{\frac{\pi}{6}}^{\frac{\pi}{3}} \frac{3 \sec^2 \theta}{4 \sec^2 x + 2 \sin 2x \sec^2 x} d\theta$$

$$= \int_{\frac{\pi}{6}}^{\frac{\pi}{3}} \frac{3 \sec^2 \theta}{4 \sec^2 x + 4 \sin x \cos x \times \frac{1}{\cos^2 x}} d\theta$$

$$= \frac{3}{4} \int_{\frac{\pi}{6}}^{\frac{\pi}{3}} \frac{\sec^2 \theta}{\sec^2 x + \frac{\sin x}{\cos x}} d\theta$$

$$= \frac{3}{4} \int_{\frac{\pi}{6}}^{\frac{\pi}{3}} \frac{\sec^2 \theta}{\sec^2 x + \tan x} d\theta$$

$$= \frac{3}{4} \int_{\frac{\pi}{6}}^{\frac{\pi}{3}} \frac{\sec^2 \theta}{1 + \tan^2 x + \tan x} d\theta$$

$$= \frac{3}{4} \int_{\frac{\pi}{6}}^{\frac{\pi}{3}} \frac{\sec^2 \theta}{1 + \frac{1}{4}(-1 + \sqrt{3} \tan \theta)^2 + \frac{1}{2}(-1 + \sqrt{3} \tan \theta)} d\theta$$

$$= \frac{3}{4} \int_{\frac{\pi}{6}}^{\frac{\pi}{3}} \frac{\sec^2 \theta}{1 + \frac{1}{4}(1 - 2\sqrt{3} \tan \theta + 3 \tan^2 \theta) - \frac{1}{2} + \frac{\sqrt{3}}{2} \tan \theta} d\theta$$

$$= \frac{3}{4} \int_{\frac{\pi}{6}}^{\frac{\pi}{3}} \frac{\sec^2 \theta}{1 + \frac{1}{4} - \frac{\sqrt{3}}{2} \tan \theta + \frac{3}{4} \tan^2 \theta - \frac{1}{2} + \frac{\sqrt{3}}{2} \tan \theta} d\theta$$

$$= \frac{3}{4} \int_{\frac{\pi}{6}}^{\frac{\pi}{3}} \frac{\sec^2 \theta}{\frac{3}{4} + \frac{3}{4} \tan^2 \theta} d\theta$$

$$\tan x = \frac{1}{2}(-1 + \sqrt{3} \tan \theta)$$

DIFF w.r.t  $\theta$

$$\sec^2 x \frac{dx}{d\theta} = \frac{1}{2} \sqrt{3} \sec^2 \theta$$

$$dx = \frac{\sqrt{3} \sec^2 \theta}{2 \sec^2 x} d\theta$$

$$x=0, \quad 0 = \frac{1}{2}(-1 + \sqrt{3} \tan \theta)$$

$$\tan \theta = \frac{1}{\sqrt{3}}$$

$$\theta = \frac{\pi}{6}$$

$$x = \frac{\pi}{4}, \quad 1 = \frac{1}{2}(-1 + \sqrt{3} \tan \theta)$$

$$2 = -1 + \sqrt{3} \tan \theta$$

$$3 = \sqrt{3} \tan \theta$$

$$\tan \theta = \sqrt{3}$$

$$\theta = \frac{\pi}{3}$$

$$= \frac{3}{4} \int_{\pi/6}^{\pi/3} \frac{1 + \cancel{\tan^2 \theta}}{\frac{3}{4} (1 + \cancel{\tan^2 \theta})} d\theta = \frac{3}{4} \int_{\pi/6}^{\pi/3} \frac{1}{\frac{3}{4}} d\theta = \int_{\pi/6}^{\pi/3} 1 d\theta$$

$$= [\theta]_{\pi/6}^{\pi/3} = \frac{\pi}{3} - \frac{\pi}{6} = \frac{\pi}{6}$$

3. a)

A, B, C ARE COLLINER.

$A(a, -3, 6)$     $B(2, b, 2)$     $C(3, 3, 0)$

$\vec{AB} = \underline{b} - \underline{a} = (2, b, 2) - (a, -3, 6) = (2-a, b+3, -4)$

$\vec{BC} = \underline{c} - \underline{b} = (3, 3, 0) - (2, b, 2) = (1, 3-b, -2)$

$\Rightarrow \frac{2-a}{1} = \frac{b+3}{3-b} = \frac{-4}{-2}$

$\Rightarrow 2-a = \frac{b+3}{3-b} = 2$

$\therefore 2-a=2$     $\& \cdot \frac{b+3}{3-b} = 2$   
 $\boxed{a=0}$

$b+3 = 6-2b$

$3b = 3$

$\boxed{b=1}$

THIS DIRECTION VECTOR IS  $(1, 2, -2)$  &  $A(0, -3, 6)$   
 $B(2, 1, 2)$

$\therefore \Gamma = (0, -3, 6) + \lambda(1, 2, -2)$

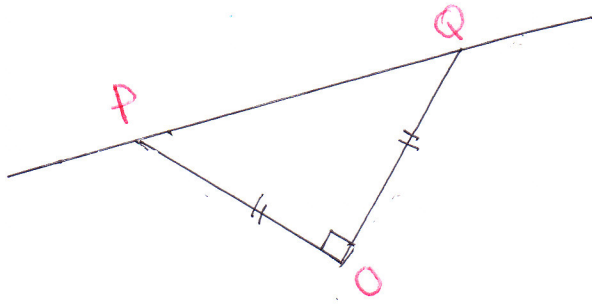
$(x, y, z) = (\lambda, 2\lambda - 3, 6 - 2\lambda)$



# Q4, 1YGB, PART I

— 5 —

b)



LET  $P = (p, 2p-3, 6-2p)$   
 $Q = (q, 2q-3, 6-2q)$   
 FOR SOME VALUES  
 $\lambda = p$  &  $\lambda = q$ ,  $P \neq Q$

①  $\vec{OP} \cdot \vec{OQ} = 0$   
 $(p, 2p-3, 6-2p) \cdot (q, 2q-3, 6-2q) = 0$   
 $pq + (2p-3)(2q-3) + (6-2p)(6-2q) = 0$   
 $pq + 4pq - 6p - 6q + 9 + 36 - 12p - 12q + 4pq = 0$   
 $9pq - 18p - 18q + 45 = 0$   
 $\boxed{pq - 2p - 2q + 5 = 0}$

②  $|\vec{OP}| = \sqrt{p^2 + (2p-3)^2 + (6-2p)^2}$   
 $|\vec{OP}| = \sqrt{p^2 + 4p^2 - 12p + 9 + 36 - 24p + 4p^2}$   
 $|\vec{OP}| = \sqrt{9p^2 - 36p + 45}$   
 $\boxed{|\vec{OP}| = 3\sqrt{p^2 - 4p + 5}}$   
 & IN ANALOGY  
 $\boxed{|\vec{OQ}| = 3\sqrt{q^2 - 4q + 5}}$

NOW COLLECTING RESULTS & FACTS

$\Rightarrow |\vec{OP}| = |\vec{OQ}|$   
 $\Rightarrow 3\sqrt{p^2 - 4p + 5} = 3\sqrt{q^2 - 4q + 5}$   
 $\Rightarrow p^2 - 4p + 5 = q^2 - 4q + 5$   
 $\Rightarrow p^2 - q^2 = 4p - 4q$   
 $\Rightarrow (p-q)(p+q) = 4(p-q)$   $\boxed{p \neq q}$   
 $\Rightarrow \boxed{p+q = 4}$   
 $\begin{matrix} q \\ \boxed{pq - 2p - 2q + 5 = 0} \end{matrix}$   
 $\Rightarrow pq - 2(p+q) + 5 = 0$   
 $\Rightarrow pq - 8 + 5 = 0$   
 $\Rightarrow \boxed{pq = 3}$

Thus  $\left. \begin{matrix} p+q = 4 \\ pq = 3 \end{matrix} \right\} \Rightarrow$   
 $\Rightarrow p^2 + pq = 4p$   
 $\Rightarrow p^2 + 3 = 4p$   
 $\Rightarrow p^2 - 4p + 3 = 0$   
 $\Rightarrow (p-1)(p-3) = 0$   
 $\Rightarrow p = \begin{matrix} 1 \\ 3 \end{matrix}$   $q = \begin{matrix} 3 \\ 1 \end{matrix}$   
 (SYMMETRICAL SOLUTION)

$\therefore P(1, -1, 4)$  &  $Q(3, 3, 0)$   
 (IN EITHER ORDER)  
 NOTE THAT ONE POINT IS IN FACT POINT A

# CH, NYGB PAPER

- 6 -

$$4. \quad f(x) = \frac{3x^4 + x^3 + 2x^2 + x - 2}{(x+1)x^5}$$

$$= \frac{-2 + x + 2x^2 + x^3 + 3x^4}{1+x} \times \frac{1}{x^5}$$

Now divide in "ASCENDING ORDER"

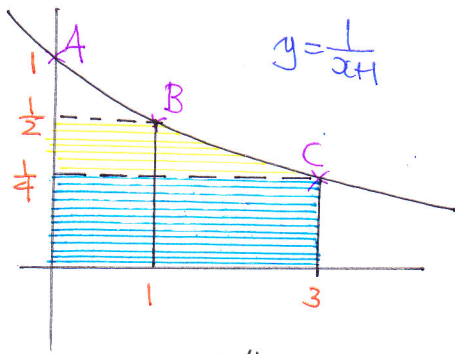
$$\begin{array}{r} 1+x \quad \overline{-2+3x-x^2+2x^3+x^4} \\ \underline{-2+x+2x^2+x^3+3x^4} \\ \phantom{1+x} \quad \quad \quad +2+2x \\ \phantom{1+x} \quad \quad \quad \underline{3x+2x^2+x^3+3x^4} \\ \phantom{1+x} \quad \quad \quad \phantom{3x+} 3x-3x^2 \\ \phantom{1+x} \quad \quad \quad \phantom{3x+} \underline{-x^2+x^3+3x^4} \\ \phantom{1+x} \quad \quad \quad \phantom{3x+} -x^2+x^3 \\ \phantom{1+x} \quad \quad \quad \phantom{3x+} \underline{+2x^3+3x^4} \\ \phantom{1+x} \quad \quad \quad \phantom{3x+} -2x^3-2x^4 \\ \phantom{1+x} \quad \quad \quad \phantom{3x+} \phantom{-2x^3-} 2x^4 \\ \phantom{1+x} \quad \quad \quad \phantom{3x+} \underline{-x^4-x^5} \\ \phantom{1+x} \quad \quad \quad \phantom{3x+} -x^5 \end{array}$$

$$\dots = \left[ -2 + 3x - x^2 + 2x^3 + x^4 - \frac{x^5}{1+x} \right] \times \frac{1}{x^5}$$

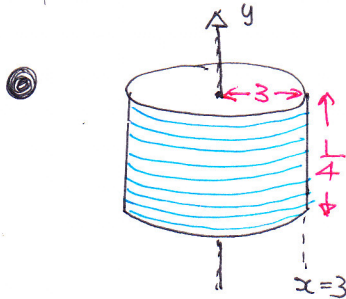
$$= -\frac{2}{x^5} + \frac{3}{x^4} - \frac{1}{x^3} + \frac{2}{x^2} + \frac{1}{x} - \frac{1}{1+x}$$

C4, 1YGB, PART T

5.



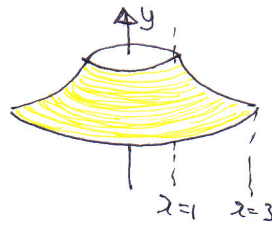
- A(0,1)
- B(1, 1/2)
- C(3, 1/4)



$$V = \pi r^2 h = \pi \times 3^2 \times \frac{1}{4} = \frac{9}{4}\pi$$

$$\begin{aligned} y &= \frac{1}{x+1} \\ x+1 &= \frac{1}{y} \\ x &= \frac{1}{y} - 1 \\ x &= \frac{1-y}{y} \end{aligned}$$

VOLUME OF THE "YELLOW" SOLID

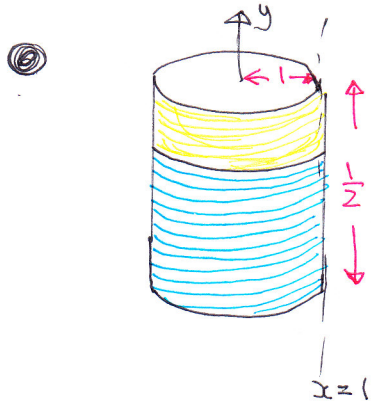


$$\begin{aligned} &= \pi \int_{y_1}^{y_2} x^2 dy \\ &= \pi \int_{\frac{1}{4}}^{\frac{1}{2}} \left(\frac{1}{y} - 1\right)^2 dy \\ &= \pi \int_{\frac{1}{4}}^{\frac{1}{2}} \left(\frac{1}{y^2} - \frac{2}{y} + 1\right) dy \\ &= \pi \left[ -\frac{1}{y} - 2\ln|y| + y \right]_{\frac{1}{4}}^{\frac{1}{2}} \end{aligned}$$

TIDYING UP THE EXPRESSION

$$\begin{aligned} &= \pi \left[ \left(-2 - 2\ln\frac{1}{2} + \frac{1}{2}\right) - \left(-4 - 2\ln\frac{1}{4} + \frac{1}{4}\right) \right] \\ &= \pi \left[ \left(-\frac{3}{2} + 2\ln 2\right) - \left(-\frac{15}{4} + 2\ln 4\right) \right] \\ &= \pi \left[ \frac{15}{4} - \frac{3}{2} + 2\ln 2 - 4\ln 2 \right] \\ &= \pi \left[ \frac{9}{4} - 2\ln 2 \right] \end{aligned}$$

C4, 1YGB, PAPER I



$$V = \pi r^2 h = \pi \times 1^2 \times \frac{1}{2} = \frac{1}{2}\pi$$

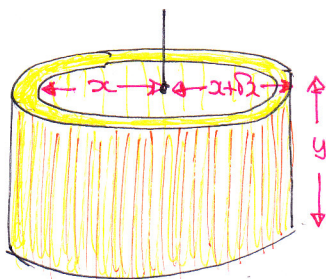
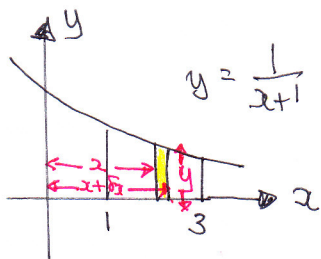
Required volume is  $\frac{9}{4}\pi + \pi \left[ \frac{9}{4} - 2 \ln 2 \right] - \frac{1}{2}\pi$

$$= \frac{9}{4}\pi + \frac{9}{4}\pi - \frac{1}{2}\pi - \pi \ln 4$$

$$= 4\pi - \ln 4$$

$$= \pi(4 - \ln 4)$$

ALTERNATIVE FROM "FIRST PRINCIPLES"



$$\delta V = [\pi(x+\delta x)^2 - \pi x^2] y$$

$$\delta V = \pi y [x^2 + 2x\delta x + \delta x^2 - x^2]$$

$$\delta V = \pi y [2x\delta x + \delta x^2]$$

$$\delta V \approx \pi y (2x\delta x)$$

Hence

$$V = \int_{x=1}^{x=3} 2\pi y x \, dx$$

$$V = \int_1^3 2\pi x \left( \frac{1}{x+1} \right) dx$$

$$V = 2\pi \int_1^3 \frac{x}{x+1} dx$$

$$V = 2\pi \int_1^3 \frac{(x+1)-1}{(x+1)} dx$$

$$V = 2\pi \int_1^3 \left( 1 - \frac{1}{x+1} \right) dx$$

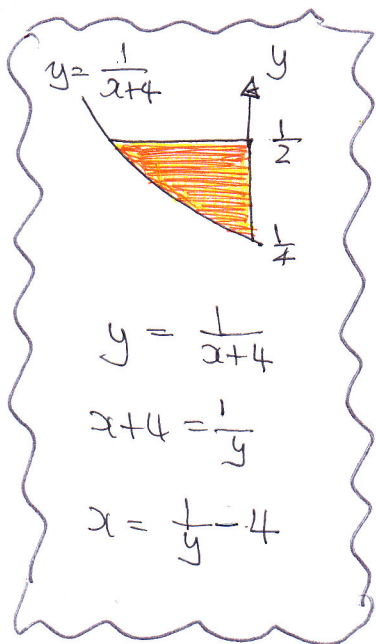
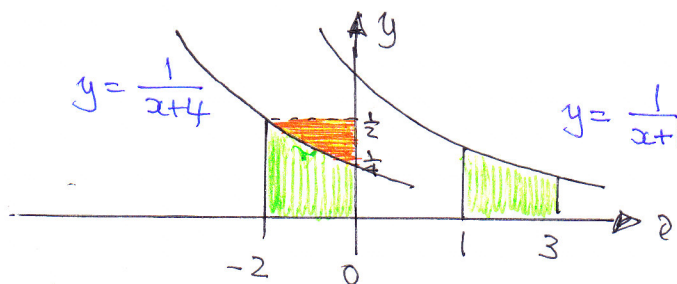
P.T.O



$$\begin{aligned}
 V &= 2\pi \left[ x - \ln|x+1| \right]_1^3 = 2\pi \left[ (3 - \ln 4) - (1 - \ln 2) \right] \\
 &= 2\pi \left[ 3 - \ln 4 - 1 + \ln 2 \right] = 2\pi \left[ 2 - 2\ln 2 + \ln 2 \right] \\
 &= 2\pi \left[ 2 - \ln 2 \right] = \pi \left[ 4 - 2\ln 2 \right] = \pi \left[ 4 - \ln 4 \right]
 \end{aligned}$$

AS BAGER

b) CAN BE DONE DIRECTLY BY FIRST PRINCIPLES AS SHOWN ABOVE OR BY TRANSLATING THE CURVE 3 UNITS TO THE "LEFT"

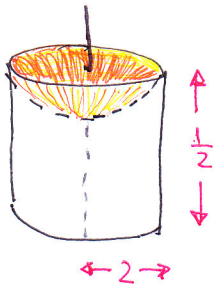


$$\begin{aligned}
 V &= \pi \int_{y_1}^{y_2} x^2 dy = \pi \int_{\frac{1}{4}}^{\frac{1}{2}} \left( \frac{1}{y} - 4 \right)^2 dy \\
 &= \pi \int_{\frac{1}{4}}^{\frac{1}{2}} \frac{1}{y^2} - \frac{8}{y} + 16 dy = \pi \left[ -\frac{1}{y} - 8\ln|y| + 16y \right]_{\frac{1}{4}}^{\frac{1}{2}} \\
 &= \pi \left[ \left( -2 - 8\ln\frac{1}{2} + 8 \right) - \left( -4 - 8\ln\frac{1}{4} + 4 \right) \right] \\
 &= \pi \left[ 6 + 8\ln 2 - 8\ln 4 \right] \\
 &= \pi \left[ 6 + 8\ln 2 - 16\ln 2 \right] \\
 &= \pi \left[ 6 - 8\ln 2 \right]
 \end{aligned}$$



CH, LYGB, PAPER T

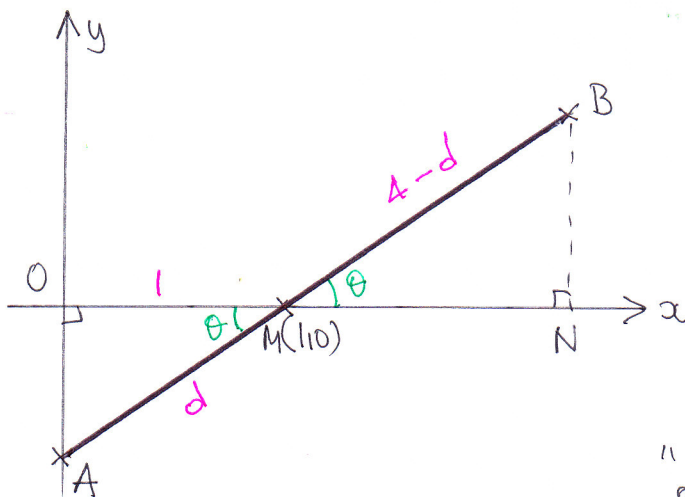
FINALY



$$V = \pi r^2 h = \pi \times 2^2 \times \frac{1}{2} = 2\pi$$

$$\begin{aligned} \therefore \text{REQUIRED VOLUME} &= 2\pi - \pi(6 - 8 \ln 2) \\ &= 2\pi - 6\pi + 8\pi \ln 2 \\ &= -4\pi + 8\pi \ln 2 \\ &= 4\pi [-1 + 2 \ln 2] \\ &= 4\pi [-1 + \ln 4] \end{aligned}$$

6. a)



Looking at  $\triangle OMB$

$$\frac{|OM|}{|AM|} = \cos \theta$$

$$\frac{1}{|AM|} = \cos \theta$$

$|AM| = \frac{1}{\cos \theta}$

Thus looking at  $\triangle BMN$  & the w. ordinates of B

$$\begin{aligned} \bullet \ x &= |OM| + |MN| = 1 + (4-d) \cos \theta = 1 + \left(4 - \frac{1}{\cos \theta}\right) \cos \theta \\ &= 1 + 4 \cos \theta - 1 = 4 \cos \theta \end{aligned}$$

$$\begin{aligned} \bullet \ y &= |BN| = (4-d) \sin \theta = \left(4 - \frac{1}{\cos \theta}\right) \sin \theta = 4 \sin \theta - \frac{\sin \theta}{\cos \theta} \\ &= 4 \sin \theta - \tan \theta \end{aligned}$$

C4, 1YGB, PART T

- 11 -

b)  $x = 4\cos\theta$      $y = 4\sin\theta - \tan\theta$

$$\Rightarrow y = 4\sin\theta - \tan\theta$$

$$\Rightarrow y = 4\sin\theta - \frac{\sin\theta}{\cos\theta}$$

$$\Rightarrow y = \sin\theta \left( 4 - \frac{1}{\cos\theta} \right)$$

$$\Rightarrow y = \sin\theta \left( \frac{4\cos\theta - 1}{\cos\theta} \right)$$

$$\Rightarrow y^2 = \sin^2\theta \frac{(4\cos\theta - 1)^2}{\cos^2\theta}$$

$$\Rightarrow y^2 = \frac{(1 - \cos^2\theta)(4\cos\theta - 1)^2}{\cos^2\theta}$$

BUT  $\cos\theta = \frac{x}{4}$

$$\Rightarrow y^2 = \frac{\left(1 - \frac{x^2}{16}\right)(x-1)^2}{\frac{x^2}{16}}$$

$$\Rightarrow y^2 = \frac{\frac{1}{16}(16-x^2)(x-1)^2}{\frac{x^2}{16}}$$

$$\Rightarrow y^2 = \frac{(16-x^2)(x-1)^2}{x^2}$$

is required

P.T.O

CH 146B, PAPER I

7. a) Restly the volume of the water (REGARD ~~SS~~ OF SALT)  
 1 LITRE IN & 1.5 LITRES OUT  $\Rightarrow$  NET OUT OF  $\frac{1}{2}$  LITRE

● BY INSPECTION

$$V = 25 - 0.5t$$

IF THE TANK EMPTIES IN 50 MINUTES

● NOW THE SALT

$$\frac{dx}{dt} = \underbrace{0.2}_{\substack{\text{PROPORTION PER 1 LITRE "IN" \\ \uparrow}} \times \underbrace{1}_{\substack{\text{LITRE "IN" \\ \uparrow}}} - \underbrace{\left(\frac{x}{V}\right)}_{\substack{\text{PROPORTION OF SALT IN THE TOTAL VOLUME \\ PER} \\ \uparrow}} \times \underbrace{1.5}_{\substack{\text{LITRES "OUT" \\ \uparrow}}}$$

$$\Rightarrow \frac{dx}{dt} = \frac{1}{5} - \frac{3x}{2V}$$

$$\Rightarrow \frac{dx}{dt} = \frac{1}{5} - \frac{3x}{2(25-0.5t)}$$

$$\Rightarrow \frac{dx}{dt} = \frac{1}{5} - \frac{3x}{50-t}$$

AS REQUIRED

OR FROM FIRST PRINCIPLES

LET  $x$  BE THE SALT AT TIME  $t$

THEN AT TIME  $t + \delta t$

$$\underbrace{x + \delta x}_{\text{MASS}} = \underbrace{x}_{\text{MASS}} + \underbrace{0.2}_{\text{MASS}} \times \underbrace{1}_{\text{VOLUME}} \times \underbrace{\delta t}_{\text{TIME}} - \underbrace{\left(\frac{x}{V}\right)}_{\text{MASS/VOLUME}} \times \underbrace{1.5}_{\text{VOLUME}} \times \underbrace{\delta t}_{\text{TIME}}$$

DIMENSIONAL CHECK

$$\Rightarrow \delta x = 0.2 \delta t - \frac{3x}{2V} \delta t$$

$$\Rightarrow \frac{\delta x}{\delta t} = 0.2 - \frac{3x}{2V}$$

TAKING LIMITS

$$\Rightarrow \frac{dx}{dt} = \frac{1}{5} - \frac{3x}{2V} \quad \& \text{ FINISH OFF AS BEFORE}$$

$$b) \quad x = \frac{1}{10}(50-t) + A(50-t)^3$$

$$\frac{dx}{dt} = -\frac{1}{10} - 3A(50-t)^2$$

$$\text{Now } A(50-t)^3 = x - \frac{1}{10}(50-t)$$

$$A = \frac{x}{(50-t)^3} - \frac{1}{10(50-t)^2}$$

$$\Rightarrow \frac{dx}{dt} = -\frac{1}{10} - 3 \underbrace{\left[ \frac{x}{(50-t)^3} - \frac{1}{10(50-t)^2} \right]}_A (50-t)^2$$

$$\Rightarrow \frac{dx}{dt} = -\frac{1}{10} - \frac{3x}{50-t} + \frac{3}{10}$$

$$\Rightarrow \frac{dx}{dt} = \frac{1}{5} - \frac{3x}{50-t} \quad \text{As required}$$

$$c) \quad \text{APPLY CONDITION } t=0 \quad x=0$$

$$0 = \frac{1}{10} \times 50 + A \times 50^3$$

$$0 = 5 + 125000A$$

$$A = -\frac{1}{25000}$$

$$\therefore \frac{dx}{dt} = -\frac{1}{10} + \frac{3}{25000}(50-t)^2$$

Set it for zero

$$\Rightarrow 0 = -\frac{1}{10} + \frac{3}{25000}(50-t)^2$$

$$\Rightarrow \frac{1}{10} = \frac{3}{25000}(50-t)^2$$

$$\Rightarrow (50 - t)^2 = \frac{2500}{3}$$

$$\Rightarrow (t - 50)^2 = \frac{2500}{3}$$

$$\Rightarrow t - 50 = \pm \frac{50}{\sqrt{3}}$$

$$\Rightarrow t = \begin{cases} 50 + \frac{50}{\sqrt{3}} \\ 50 - \frac{50}{\sqrt{3}} \end{cases} \leftarrow \text{NOT PHYSICALLY POSSIBLE AS THE TANK EMPTIES IN 50 MINUTES}$$

$$\Rightarrow \frac{50}{\sqrt{3}} = 50 - t$$

$$\text{Hence } x = \frac{1}{10}(50 - t) - \frac{1}{25000}(50 - t)^3$$

$$x = \frac{1}{10} \times \frac{50}{\sqrt{3}} - \frac{1}{25000} \times \left(\frac{50}{\sqrt{3}}\right)^3$$

$$x = \frac{5}{\sqrt{3}} - \frac{125000}{25000 \times 3\sqrt{3}}$$

$$x = \frac{5}{\sqrt{3}} - \frac{5}{3\sqrt{3}}$$

$$x = \frac{5}{\sqrt{3}} \left(1 - \frac{1}{3}\right)$$

$$x = \frac{5}{\sqrt{3}} \times \frac{2}{3}$$

$$x = \frac{10}{3\sqrt{3}} \quad \text{or} \quad \frac{10}{9}\sqrt{3}$$



# Q4, 1YGB, PART I

— 15 —

$$8. \quad 1 + \frac{1}{24} + \frac{1 \times 4}{24 \times 48} + \frac{1 \times 4 \times 7}{24 \times 48 \times 72} + \frac{1 \times 4 \times 7 \times 10}{24 \times 48 \times 72 \times 96} + \dots$$

① CREATE FACTORIALS AT THE BOTTOM FIRST

$$= 1 + \frac{1}{24(1)} + \frac{1 \times 4}{24^2(1 \times 2)} + \frac{1 \times 4 \times 7}{24^3(1 \times 2 \times 3)} + \frac{1 \times 4 \times 7 \times 10}{24^4(1 \times 2 \times 3 \times 4)} + \dots$$

② BY INSPECTION THE NUMERATOR "JUMP IN 3s", SO IN A BINOMIAL IT LOOKS LIKE  $-\frac{1}{3}, -\frac{4}{3}, -\frac{7}{3}, -\frac{10}{3}$  ETC

SO GET "3" TO THE TOP

$$= 1 + \frac{\frac{1}{3}}{8(1!)} + \frac{\frac{1}{3}(\frac{4}{3})}{8^2(2!)} + \frac{\frac{1}{3}(\frac{4}{3})(\frac{7}{3})}{8^3(3!)} + \frac{\frac{1}{3}(\frac{4}{3})(\frac{7}{3})(\frac{10}{3})}{8^4(4!)} + \dots$$

③ SORT OUT THE MINUS SIGNS & REWRITE AS

$$= 1 + \frac{(-\frac{1}{3})}{1!} \left(-\frac{1}{8}\right) + \frac{(-\frac{1}{3})(-\frac{4}{3})}{2!} \left(-\frac{1}{8}\right)^2 + \frac{(-\frac{1}{3})(-\frac{4}{3})(-\frac{7}{3})}{3!} \left(-\frac{1}{8}\right)^3 + \frac{(-\frac{1}{3})(-\frac{4}{3})(-\frac{7}{3})(-\frac{10}{3})}{4!} \left(-\frac{1}{8}\right)^4 + \dots$$

④ WHICH IS THE BINOMIAL EXPANSION OF  $(1+x)^{-\frac{1}{3}}$  WITH  $x = -\frac{1}{8}$

$$= \left(1 - \frac{1}{8}\right)^{-\frac{1}{3}} = \left(\frac{7}{8}\right)^{-\frac{1}{3}} = \left(\frac{8}{7}\right)^{\frac{1}{3}} = \sqrt[3]{\frac{8}{7}} = \frac{2}{\sqrt[3]{7}}$$

~~ANSWER~~