

C4, INGB, PART 2 §

-1-

1.

$$xy + x^2y + ay = 1$$

Diff w.r.t x

$$\Rightarrow \left[1xy + x \frac{dy}{dx} \right] + \left[3x^2y + x^3 \frac{dy}{dx} \right] + a \frac{dy}{dx} = 0$$

$$\Rightarrow y + x \frac{dy}{dx} + 3x^2y + x^3 \frac{dy}{dx} + a \frac{dy}{dx}$$

$$\Rightarrow (x + x^3 + a) \frac{dy}{dx} = -y - 3x^2y$$

$$\Rightarrow \frac{dy}{dx} = - \frac{y + 3x^2y}{x + x^3 + a}$$

$$\Rightarrow \frac{dy}{dx} = - \frac{y(y + 3x^2y)}{y(x + x^3 + a)}$$

$$\Rightarrow \frac{dy}{dx} = - \frac{y^2 + 3x^2y^2}{\underbrace{yx + yx^3 + ay}_{=1}}$$

$$\Rightarrow \frac{dy}{dx} = - (y^2 + 3x^2y^2) < 0$$

for all x and y

EVIDENTLY $y \neq 0$ FROM
EQUATION OF THE CURVE
OTHERWISE $0=1$

ALTERNATIVE WAY FOR IMPACT

$$xy + x^2y + ay = 1$$

$$y(x + x^3 + a) = 1$$

$$y = \frac{1}{x + x^3 + a}$$

$$y = (x^3 + x + a)^{-1}$$

$$\frac{dy}{dx} = -(x^3 + x + a)^{-2} (3x^2 + 1)$$

$$\frac{dy}{dx} = - \frac{\underbrace{(3x^2 + 1)}_{\leftarrow \text{AT LEAST } 1}}{\underbrace{(x^3 + x + a)^2}_{\leftarrow \text{NON NEGATIVE}}}$$

$$\therefore \frac{dy}{dx} < 0$$

C4, NGB, PAPER 5

- 2 -

$$\begin{aligned} 2. a) \left(1 + \frac{4}{7}nx\right)^n &= 1 + \frac{n}{1}\left(\frac{4}{7}nx\right) + \frac{n(n-1)}{1 \times 2}\left(\frac{4}{7}nx\right)^2 + \frac{n(n-1)(n-2)}{1 \times 2 \times 3}\left(\frac{4}{7}nx\right)^3 + O(x^4) \\ &= 1 + \frac{4}{7}n^2x + \frac{8}{49}n^2(n-1)x^2 + \frac{32}{1029}n^2(n-1)(n-2)x^3 + O(x^4) \end{aligned}$$

$$\text{NOW } \frac{8}{49}n^3(n-1) = \frac{32}{1029}n^4(n-1)(n-2) \quad \begin{array}{l} n \neq 0 \\ n \neq 1 \end{array}$$

$$\Rightarrow \frac{8}{49} = \frac{32}{1029}n(n-2)$$

$$\Rightarrow \frac{21}{4} = n(n-2)$$

$$\Rightarrow 21 = 4n(n-2)$$

$$\Rightarrow 0 = 4n^2 - 8n - 21$$

$$\Rightarrow 0 = (2n+3)(2n-7)$$

$$\Rightarrow n = \begin{array}{l} \frac{7}{2} \\ -\frac{3}{2} \end{array} //$$

b) • If $n = \frac{7}{2}$

$$\frac{4}{7} \times \frac{7}{2} \times 1 = 2 > 1$$

$$n \neq \frac{7}{2}$$

• If $n = -\frac{3}{2}$

$$\frac{4}{7} \left(-\frac{3}{2}\right) \times 1 = -\frac{6}{7}$$

$$\& -1 < -\frac{6}{7} < 1$$

$$n = -\frac{3}{2} \text{ IS THE ONLY VALUE} //$$

(P.T.O)

3. a)

$$\begin{aligned} x &= 4\cos 3\theta \\ y &= 4\sin 3\theta \end{aligned} \quad 0 \leq \theta \leq \frac{\pi}{6}$$

$$\bullet x=0 \Rightarrow \cos 3\theta = 0$$

$$\Rightarrow 3\theta = \pm \frac{\pi}{2} \pm 2n\pi \quad n=0,1,2,3, \dots$$

$$\Rightarrow \theta = \pm \frac{\pi}{6} \pm \frac{2}{3}n\pi$$

$$\text{ONLY VALUE IS } \theta = \frac{\pi}{6}$$

$$\bullet \frac{dy}{dx} = \frac{dy/d\theta}{dx/d\theta} = \frac{4\cos\theta}{-12\sin 3\theta} = -\frac{\cos\theta}{3\sin 3\theta}$$

$$\bullet \left. \frac{dy}{dx} \right|_{\theta=\frac{\pi}{6}} = -\frac{\cos \frac{\pi}{6}}{3\sin \frac{\pi}{2}} = -\frac{\frac{\sqrt{3}}{2}}{3 \times 1} = -\frac{\sqrt{3}}{6}$$

• EQUATION OF TANGENT

$$y = -\frac{\sqrt{3}}{6}x + 2 \Rightarrow 6y = -\sqrt{3}x + 12$$

$$6y + \sqrt{3}x = 12$$

As required

b) • FIRSTLY BY INSPECTION OF $x = 4\cos 3\theta \Rightarrow Q(4,0)$

$$\theta = 0 \text{ AT } Q$$

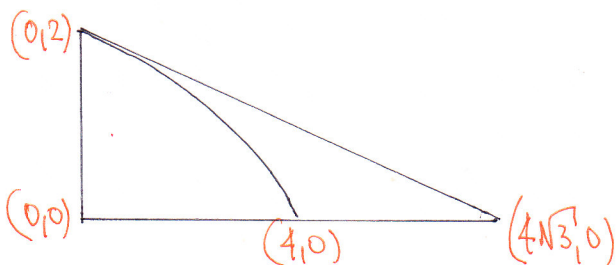
• SECONDLY THE TANGENT MEETS THE x AXIS AT $6x + \sqrt{3}x = 12$

$$3x = 12\sqrt{3}$$

$$x = 4\sqrt{3}$$

$$\therefore (4\sqrt{3}, 0)$$

• SO "TRIANGLE" AREA = $\frac{1}{2} \times 2 \times 4\sqrt{3} = 4\sqrt{3}$



C4, 14GB, PAPER 5

- 4 -

● AREA UNDER PARAMETRIC CURVE (LIMITS ROUND FARUKE)

$$\begin{aligned} A &= \int_{x_1}^{x_2} y(x) dx = \int_{t_1}^{t_2} y(t) \frac{dx}{dt} dt = \int_{\frac{\pi}{6}}^0 4\sin\theta (-12\sin 3\theta) d\theta \\ &= \int_{\frac{\pi}{6}}^0 -48\sin 3\theta \sin\theta d\theta = \int_0^{\frac{\pi}{6}} 48\sin 3\theta \sin\theta d\theta \end{aligned}$$

BY PARTS TWICE OR TRIGONOMETRIC IDENTITIES

$$\cos 4\theta = \cos(3\theta + \theta) = \cos 3\theta \cos\theta - \sin 3\theta \sin\theta$$

$$\cos 2\theta = \cos(3\theta - \theta) = \cos 3\theta \cos\theta + \sin 3\theta \sin\theta$$

$$\text{SUBTRACT: } \cos 2\theta - \cos 4\theta = 2\sin 3\theta \sin\theta$$

$$24\cos 2\theta - 24\cos 4\theta = 48\sin 3\theta \sin\theta$$

$$\dots = \int_0^{\frac{\pi}{6}} 24\cos 2\theta - 24\cos 4\theta d\theta = \left[12\sin 2\theta - 6\sin 4\theta \right]_0^{\frac{\pi}{6}}$$

$$= \left(12\sin \frac{\pi}{3} - 6\sin \frac{2\pi}{3} \right) - (0)$$

$$= 12\left(\frac{\sqrt{3}}{2}\right) - 6\left(\frac{\sqrt{3}}{2}\right)$$

$$= 6\sqrt{3} - 3\sqrt{3}$$

$$= 3\sqrt{3}$$

$$\therefore \text{REQUIRED AREA} = 4\sqrt{3} - 3\sqrt{3} = \sqrt{3}$$

~~As Required~~

4. a) I) $x^2+x+2 = (u-x)^2$

$$\cancel{x^2} + x + 2 = u^2 - 2ux + \cancel{x^2}$$

$$2ux + x = u^2 - 2$$

$$x(2u+1) = u^2 - 2$$

$$x = \frac{u^2 - 2}{2u+1} \quad \text{As Required}$$

II) $\frac{dx}{du} = \frac{(2u+1)(2u) - (u^2-2) \times 2}{(2u+1)^2} = \frac{4u^2 + u - 2u^2 + 4}{(2u+1)^2}$

$$= \frac{2u^2 + 2u + 4}{(2u+1)^2} = \frac{2(u^2 + u + 2)}{(2u+1)^2} \quad \text{As Required}$$

b) $\int \frac{1}{x \sqrt{x^2+x+2}} dx$

$$= \int \frac{1}{\left(\frac{u^2-2}{2u+1}\right)(u-x)} \frac{dx}{du} du$$

$$= \int \frac{2u+1}{(u^2-2)(u-x)} \times \frac{2(u^2+u+2)}{(2u+1)^2} du$$

$$= \int \frac{2u+1}{(u^2-2)\left(\frac{u^2+u+2}{2u+1}\right)} \times \frac{2(u^2+u+2)}{(2u+1)^2} du$$

$$= \int \frac{\cancel{(2u+1)^2}}{(u^2-2)\cancel{(u^2+u+2)}} \times \frac{2\cancel{(u^2+u+2)}}{\cancel{(2u+1)^2}} du$$

$$= \int \frac{2}{u^2-2} du$$

Let $\sqrt{x^2+x+2} = u-x$

$$x^2+x+2 = (u-x)^2$$

$$x = \frac{u^2-2}{2u+1}$$

$$\frac{dx}{du} = \frac{2(u^2+u+2)}{(2u+1)^2}$$

$$u-x = u - \frac{u^2-2}{2u+1}$$

$$u-x = \frac{2u^2+u-u^2+2}{2u+1}$$

$$u-x = \frac{u^2+u+2}{2u+1}$$

Q4, 1YGB, PART 2

is

$$= \int \frac{2}{(u-\sqrt{2})(u+\sqrt{2})} du$$

BY PARTIAL FRACTIONS (OR STANDARD QUOTED PRODUCTS)

$$\frac{2}{(u-\sqrt{2})(u+\sqrt{2})} \equiv \frac{A}{u-\sqrt{2}} + \frac{B}{u+\sqrt{2}}$$

$$2 \equiv A(u+\sqrt{2}) + B(u-\sqrt{2})$$

• If $u = \sqrt{2} \Rightarrow 2 = 2\sqrt{2}A$

$$\Rightarrow 1 = \sqrt{2}A$$

$$\Rightarrow \boxed{A = \frac{1}{\sqrt{2}}}$$

• If $u = -\sqrt{2} \Rightarrow 2 = -2\sqrt{2}B$

$$\Rightarrow -1 = \sqrt{2}B$$

$$\Rightarrow \boxed{B = -\frac{1}{\sqrt{2}}}$$

$$= \int \frac{\frac{1}{\sqrt{2}}}{u-\sqrt{2}} - \frac{\frac{1}{\sqrt{2}}}{u+\sqrt{2}} du = \frac{1}{\sqrt{2}} \ln|u-\sqrt{2}| - \frac{1}{\sqrt{2}} \ln|u+\sqrt{2}| + C$$

$$= \frac{1}{\sqrt{2}} \ln \left| \frac{u-\sqrt{2}}{u+\sqrt{2}} \right| + C$$

BUT $u = x + \sqrt{x^2+x+2}$

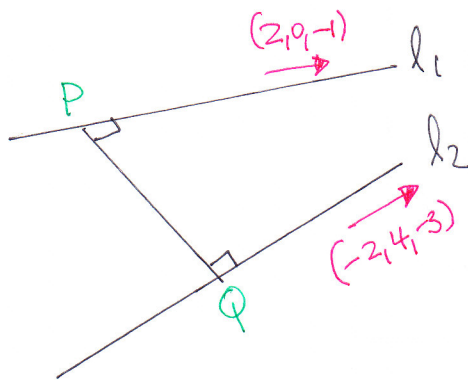
$$= \frac{1}{\sqrt{2}} \ln \left| \frac{x + \sqrt{x^2+x+2} - \sqrt{2}}{x + \sqrt{x^2+x+2} + \sqrt{2}} \right| + C$$

(P.T.O)

C4, 1YGB, PAPER 5

-7-

5.



• FIRST FIND A "COMMON" PERPENDICULAR

$$(x, y, z) \cdot (2, 0, -1) = 0$$

$$(x, y, z) \cdot (-2, 4, -3) = 0$$

$$\left. \begin{aligned} 2x - z &= 0 \\ -2x + 4y - 3z &= 0 \end{aligned} \right\} \text{LET } \boxed{z=2}$$

$$\text{THEN } \begin{aligned} 2x - 2 &= 0 & -2x + 4y - 3z &= 0 \\ 2x &= 2 & -2 + 4y - 6 &= 0 \\ \boxed{x=1} & & 4y &= 8 \\ & & \boxed{y=2} & \end{aligned}$$

HENCE THE COMMON PERPENDICULAR IS $(1, 2, 2)$

(NATURALLY THE CROSS PRODUCT CAN BE USED HERE IF KNOWN)

• NOW $\underline{r}_1 = (7, 1, 2) + \lambda(2, 0, -1) = (2\lambda + 7, 1, 2 - \lambda)$

$$\underline{r}_2 = (14, 19, 3) + \mu(-2, 4, -3) = (14 - 2\mu, 4\mu + 19, 3 - 3\mu)$$

NOW LET $P(2\lambda + 7, 1, 2 - \lambda)$ & $Q(14 - 2\mu, 4\mu + 19, 3 - 3\mu)$

• $\vec{PQ} = \underline{q} - \underline{p} = (14 - 2\mu, 4\mu + 19, 3 - 3\mu) - (2\lambda + 7, 1, 2 - \lambda)$
 $= (7 - 2\mu - 2\lambda, 18 + 4\mu, 1 - 3\mu + \lambda)$

• $\vec{PQ} = k(1, 2, 2)$ FOR SOME k

$$\text{IF } \left. \begin{aligned} 7 - 2\mu - 2\lambda &= k \\ 18 + 4\mu &= 2k \\ 1 - 3\mu + \lambda &= 2k \end{aligned} \right\} \Rightarrow \left. \begin{aligned} 18 + 4\mu &= 2(7 - 2\mu - 2\lambda) \\ 1 - 3\mu + \lambda &= 2(7 - 2\mu - 2\lambda) \end{aligned} \right\} \Rightarrow$$

$$\left. \begin{aligned} 18 + 4\mu &= 14 - 4\mu - 4\lambda \\ 1 - 3\mu + \lambda &= 14 - 4\mu - 4\lambda \end{aligned} \right\} \Rightarrow \left. \begin{aligned} 4\lambda + 8\mu &= -4 \\ 5\lambda + \mu &= 13 \end{aligned} \right\} \Rightarrow$$

Q4, NYGB, PAPER 8

-8-

$$\left. \begin{array}{l} \lambda + 2\mu = -1 \\ 5\lambda + \mu = 13 \end{array} \right\} \Rightarrow \boxed{\mu = 13 - 5\lambda}$$

$$\Rightarrow \lambda + 2(13 - 5\lambda) = -1$$

$$\Rightarrow \lambda + 26 - 10\lambda = -1$$

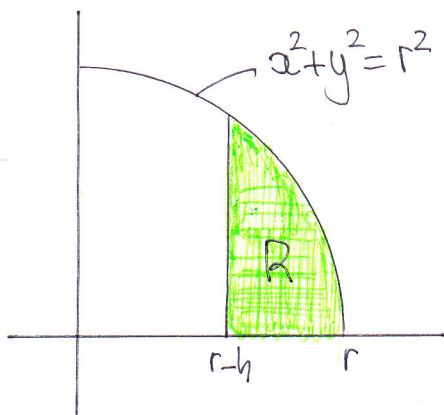
$$\Rightarrow -9\lambda = -27$$

$$\Rightarrow \boxed{\lambda = 3}$$

$$\therefore \boxed{\mu = -2}$$

∴ Thus $P(13, 11, -1)$ & $Q(18, 11, 9)$

6.



$$V = \pi \int_{x_1}^{x_2} (y(x))^2 dx$$

$$V = \pi \int_{r-h}^r (r^2 - x^2) dx$$

$$V = \pi \left[r^2 x - \frac{1}{3} x^3 \right]_{r-h}^r$$

$$V = \pi \left[\left(r^3 - \frac{1}{3} r^3 \right) - \left(r^2(r-h) - \frac{1}{3} (r-h)^3 \right) \right]$$

Q4, YGB, PAPER 5

- 9 -

$$\Rightarrow V = \pi \left[r^3 - \frac{1}{3}r^3 - r^3 + r^2h + \frac{1}{3}(r^3 - 3r^2h + 3rh^2 - h^3) \right]$$

$$\Rightarrow V = \pi \left[\cancel{r^3} - \cancel{\frac{1}{3}r^3} - \cancel{r^3} + r^2h + \frac{1}{3}\cancel{r^3} - \cancel{r^2h} + rh^2 - \frac{1}{3}h^3 \right]$$

$$\Rightarrow V = \pi \left[rh^2 - \frac{1}{3}h^3 \right]$$

$$\Rightarrow r = \frac{1}{3}\pi h^2 (3r - h)$$

~~AS REQUIRED~~

7. a)

$$V = \frac{k}{D-h}$$

$$D = 800$$

$$V = \frac{k}{800-h}$$

$$\bullet h = 350 \quad V = 8$$

$$8 = \frac{k}{800-350}$$

$$8 = \frac{k}{450}$$

$$k = 3600$$

$$\bullet h = 400 \quad V = ?$$

$$V = \frac{3600}{800-400}$$

$$V = \frac{3600}{400}$$

$$V = 9$$

~~AS REQUIRED~~

$$b) \quad \frac{dV}{dh} = \frac{d}{dh} \left[\frac{k}{800-h} \right] = \frac{d}{dh} \left[k(800-h)^{-1} \right]$$

$$= k(800-h)^{-2} = \frac{k}{(800-h)^2} = \frac{3600}{(800-h)^2}$$

$$\left. \frac{dV}{dh} \right|_{h=400} = \frac{3600}{(800-400)^2} = \frac{3600}{400^2} = \frac{3600}{160000} = \frac{9}{400}$$

~~↳ $\frac{9}{400}$ cm^3 per cm risen~~

C4, 14GB, PAPER 5

c) $\frac{dr}{dh} = \frac{dr}{dv} \times \frac{dv}{dh}$

$$\frac{dr}{dh} = \frac{1}{4\pi r^2} \times \frac{3600}{(800-h)^2}$$

$$\frac{dr}{dh} = \frac{900}{\pi r^2 (800-h)^2}$$

$$\left. \frac{dr}{dh} \right|_{h=400} = \frac{900}{\pi \times \frac{9}{(4\pi)^{\frac{2}{3}}} \times 400^2}$$

$(r^2 = \frac{9}{(4\pi)^{\frac{2}{3}}})$

$$\left. \frac{dr}{dh} \right|_{h=400} = \frac{4 \times 900}{4\pi \times \frac{9}{(4\pi)^{\frac{2}{3}}} \times 160000}$$

$$\left. \frac{dr}{dh} \right|_{h=400} = \frac{4 \times 900}{9 \times (4\pi)^{\frac{1}{3}} \times \frac{160000}{400}}$$

$$\left. \frac{dr}{dh} \right|_{h=400} = \frac{1}{400 \sqrt[3]{4\pi}}$$

~~AS ANSWER~~

$$V = \frac{4}{3} \pi r^3$$
$$\frac{dv}{dr} = 4\pi r^2$$
$$\frac{dr}{dv} = \frac{1}{4\pi r^2}$$

when $h = 400$
 $V = 9$

$$9 = \frac{4}{3} \pi r^3$$
$$\frac{27}{4\pi} = r^3$$
$$(r^3)^{\frac{2}{3}} = \left(\frac{27}{4\pi}\right)^{\frac{2}{3}}$$
$$r^2 = \frac{9}{(4\pi)^{\frac{2}{3}}}$$

C4, 1YGB, PAPER 8

-11-

8. a) $\frac{dx}{dt} \propto \frac{8-t}{x}$

$$\Rightarrow \frac{dx}{dt} = \frac{k(8-t)}{x}$$

• APPLY CONDITION

$$72 = \frac{k \times 6}{336}$$

$$6k = 72 \times 336$$

$$k = 4032$$

$$\Rightarrow \frac{dx}{dt} = \frac{4032(8-t)}{x}$$

$$\Rightarrow x \frac{dx}{dt} = 4032(8-t) \quad \text{AS REQUIRED}$$

b) $\Rightarrow x dx = 4032(8-t) dt$

$$\Rightarrow \int_{x=336}^x x dx = 4032 \int_{t=2}^t (8-t) dt$$

$$\Rightarrow \left[\frac{1}{2} x^2 \right]_{336}^x = 4032 \left[8t - \frac{1}{2} t^2 \right]_2^t$$

$$\Rightarrow \left[x^2 \right]_{336}^x = 4032 \left[16t - t^2 \right]_2^t$$

$$\Rightarrow x^2 - 336^2 = 4032 \left[(16t - t^2) - (32 - 4) \right]$$

$$\Rightarrow x^2 - 336^2 = 4032 \left[16t - t^2 - 28 \right]$$

$$\Rightarrow x^2 - 112896 = 4032(16t - t^2) - 112896$$

$$\Rightarrow x^2 = 4032t(16-t) \quad \text{AS REQUIRED}$$

$x = \text{SALES}$
 $t = \text{TIME OPEN}$

$$t = 2$$

$$x = 336$$

$$\frac{dx}{dt} = 72$$

EASIER IF WE ASSUME

$$t=0, x=0$$

C4, 1YGB, PAGE 8

-12-

c) when $t=8 \Rightarrow x^2 = 4032 \times 8 \times (16-8)$
 $x^2 = 4032 \times 64$
 $x^2 = 258048$
 $x \approx 507.98 \dots$
It ~~is~~ 507.98

d) $x \frac{dx}{dt} = 4032(8-t)$
 $x^2 \left(\frac{dx}{dt} \right)^2 = 4032^2 (8-t)$

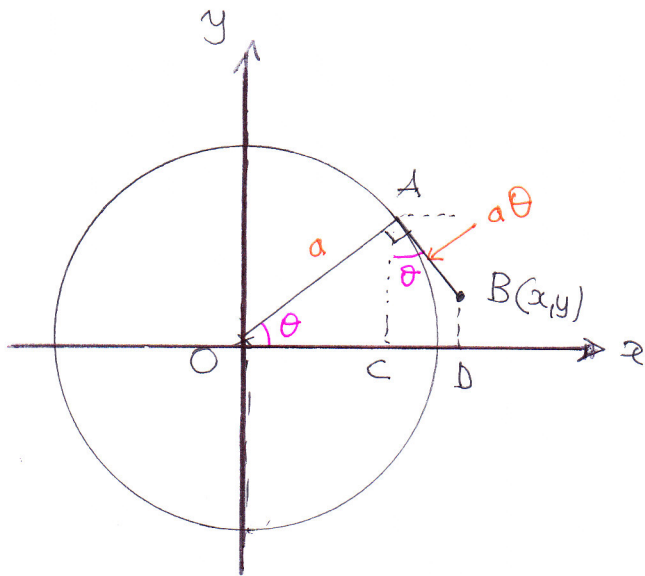
now $\frac{dx}{dt} = 24$

$\Rightarrow 4032 \cancel{t} (16-t) \times 24^2 = 4032^2 (8-t)^2$
 $\Rightarrow t(16-t) \times 576 = (8-t)^2 \times 4032$
 $\Rightarrow t(16-t) = (8-t)^2 \times 7$
 $\Rightarrow 16t - t^2 = (64 - 16t + t^2) \times 7$
 $\Rightarrow 16t - t^2 = 448 - 112t + 7t^2$
 $\Rightarrow 0 = 8t^2 - 128t + 448$
 $\Rightarrow 0 = t^2 - 16t + 56$
 $\Rightarrow (t-8)^2 - 64 + 56 = 0$
 $\Rightarrow (t-8)^2 = 8$
 $\Rightarrow t = 8 \pm 2\sqrt{2}$

$t = 8 - 2\sqrt{2}$
 $\approx 5.171 \dots$
 $\approx 14:10$

C4, IYGB, PAPER 5

9.



BY GEOMETRY

• $x = |OD| = |OC| + |CD|$

$x = a \cos \theta + a \theta \sin \theta$

$x = a (\cos \theta + \theta \sin \theta)$

• $y = |BD|$

$y = |AC| - |AB| \cos \theta$

$y = a \sin \theta - a \theta \cos \theta$

$y = a (\sin \theta - \theta \cos \theta)$

∴ $x = a (\cos \theta + \theta \sin \theta)$

$y = a (\sin \theta - \theta \cos \theta)$

